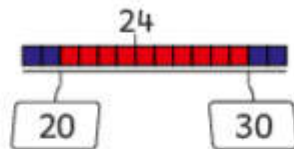
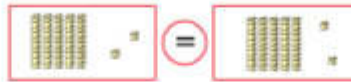




100



einhundert





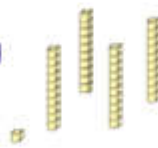
91 < 93

# Die Zahlen bis 100 mit Mathemonsterchen



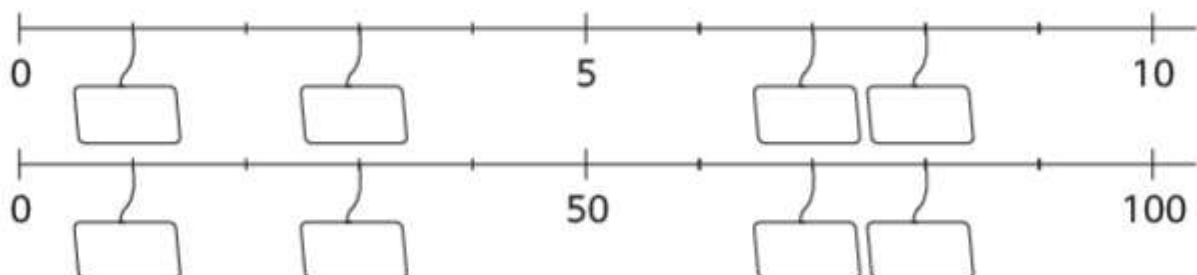
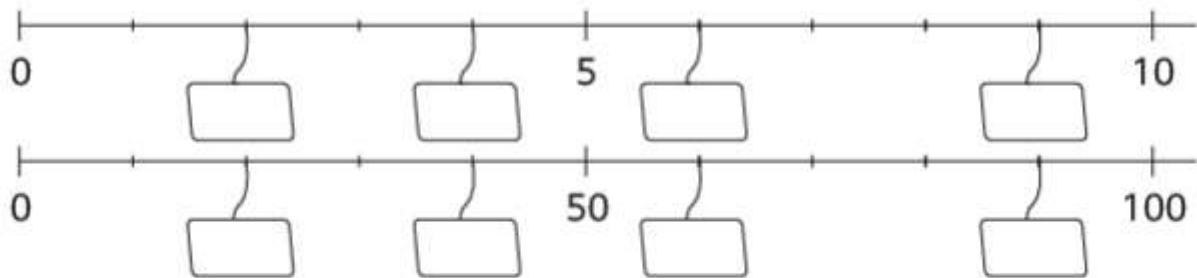
zweiundvierzig

42



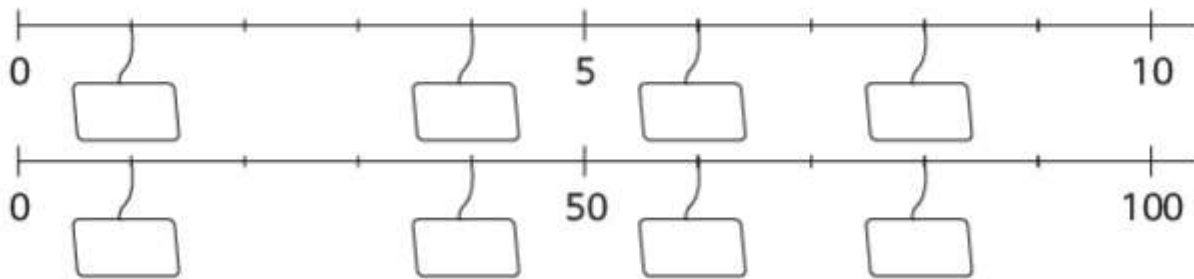
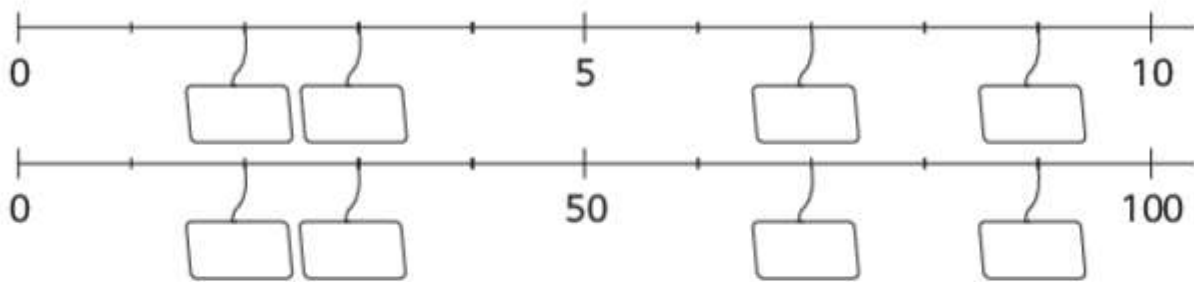
www.mathemonsterchen.de

Trage die passenden Zahlen ein.

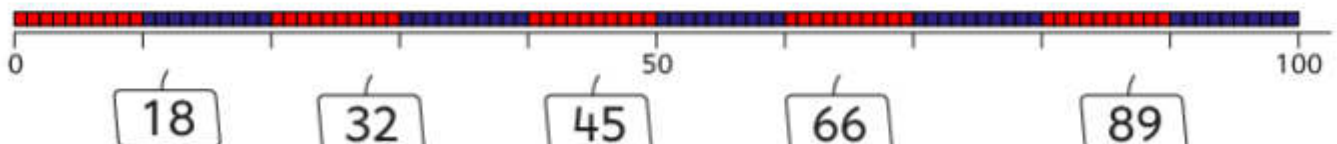
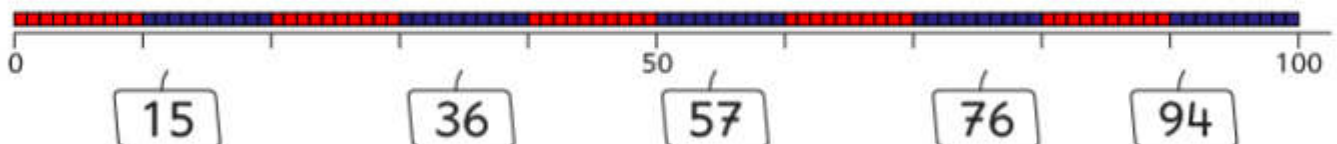
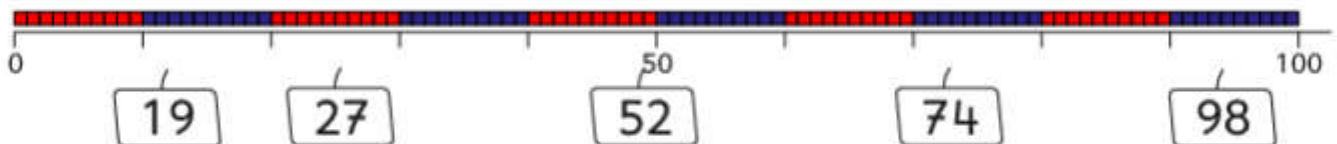
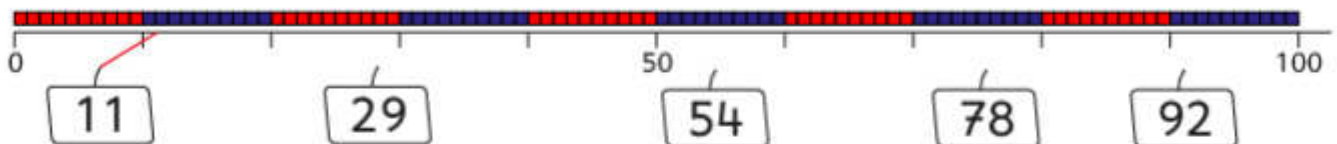


www.mathemonsterchen.de

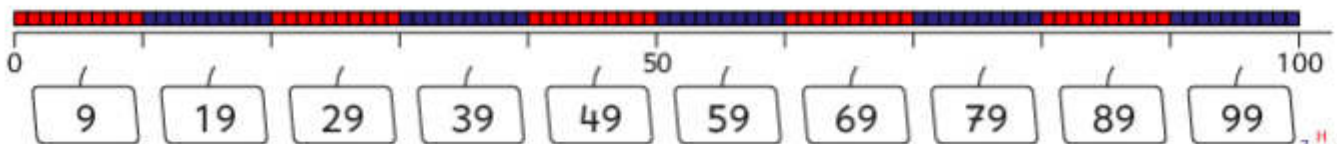
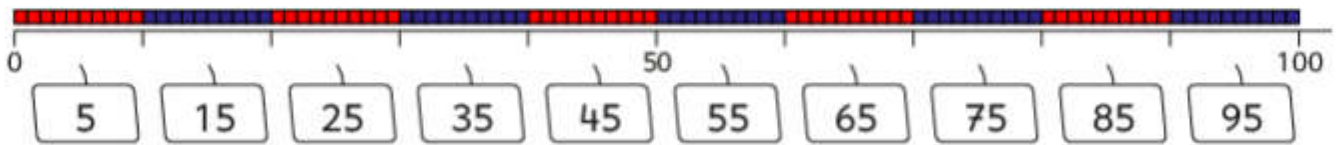
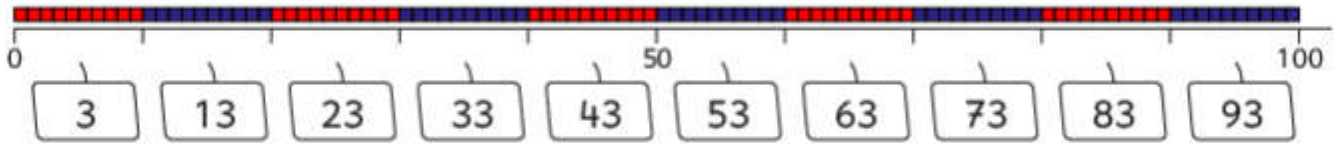
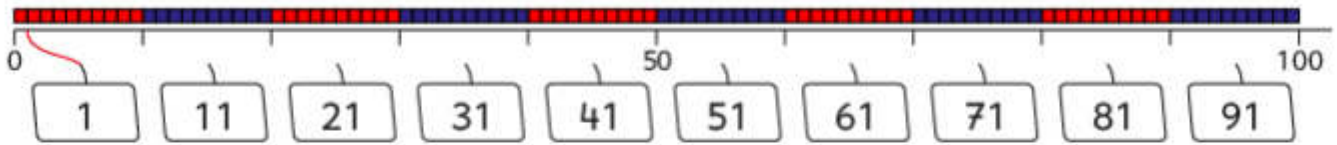
Trage die passenden Zahlen ein.



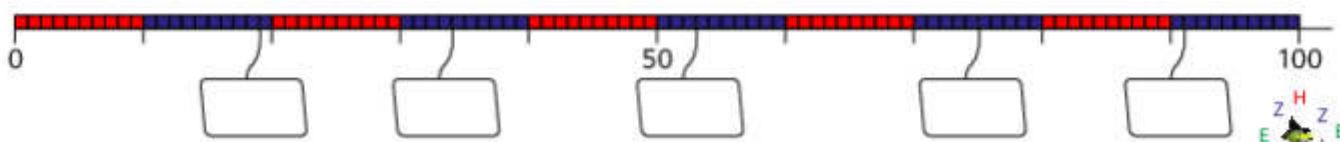
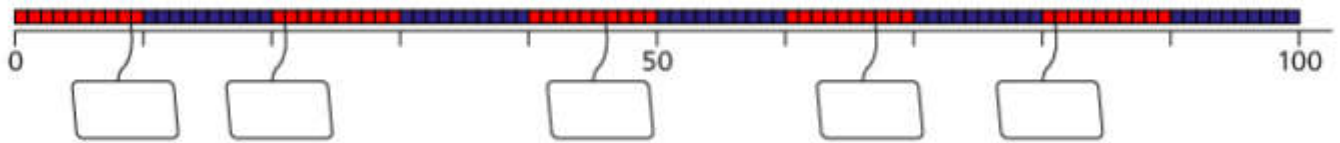
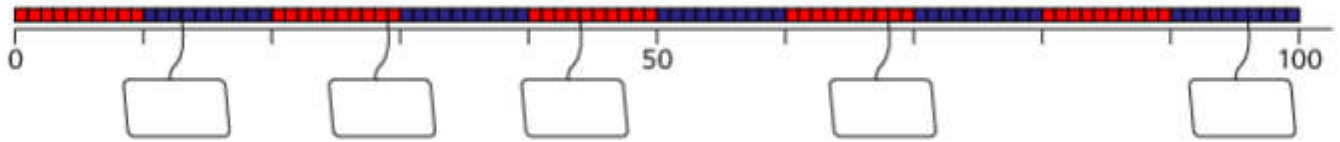
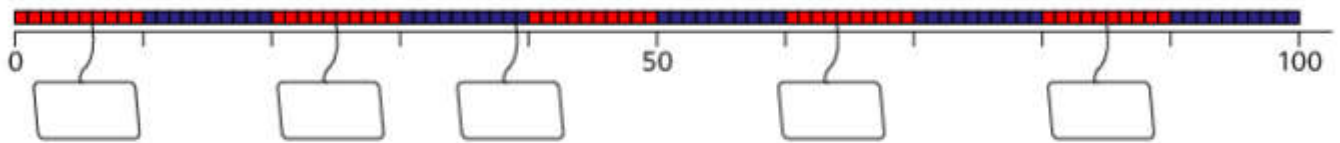
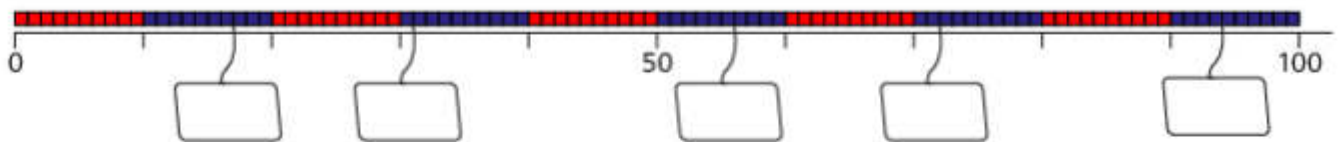
Verbinde.




# Verbinde.



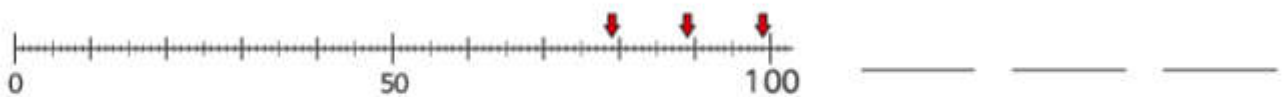

# Trage die Zahlen ein.



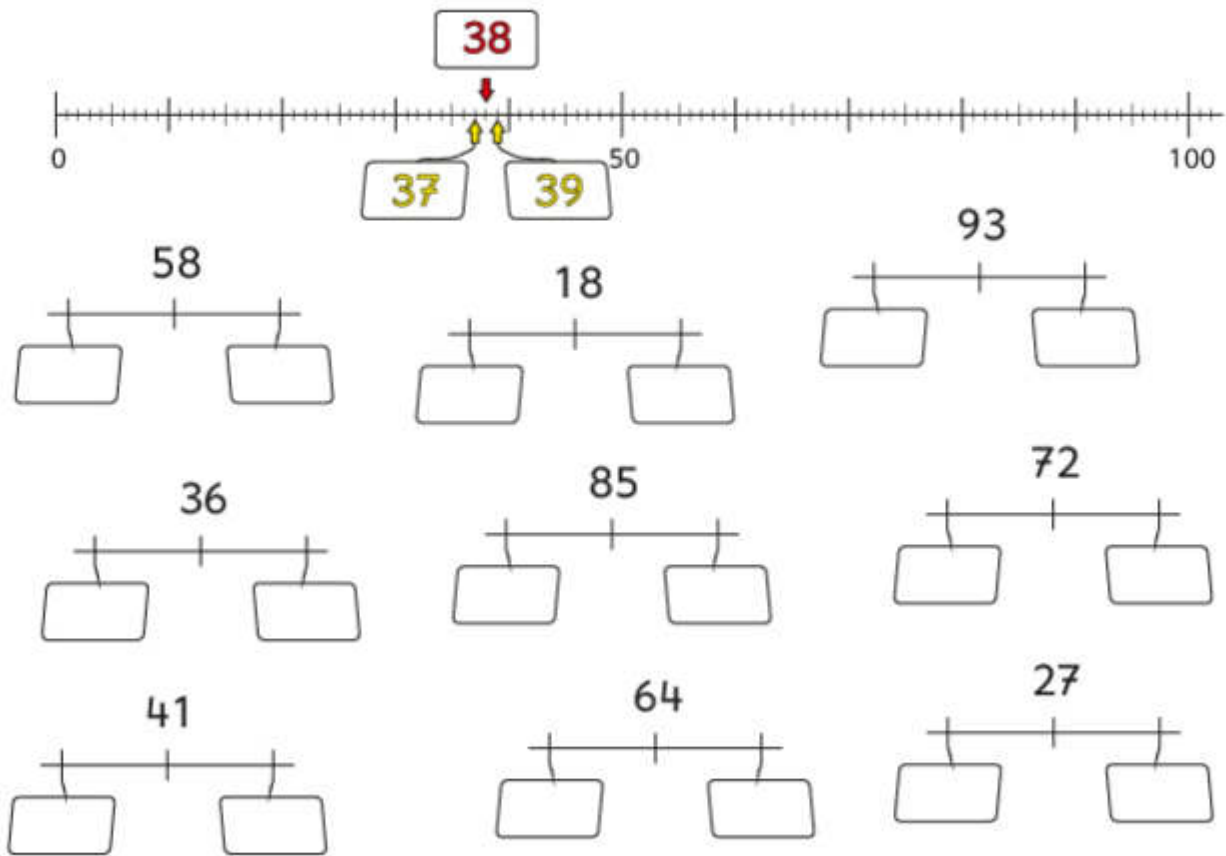
## Auf welche Zahl zeigt der Pfeil ?



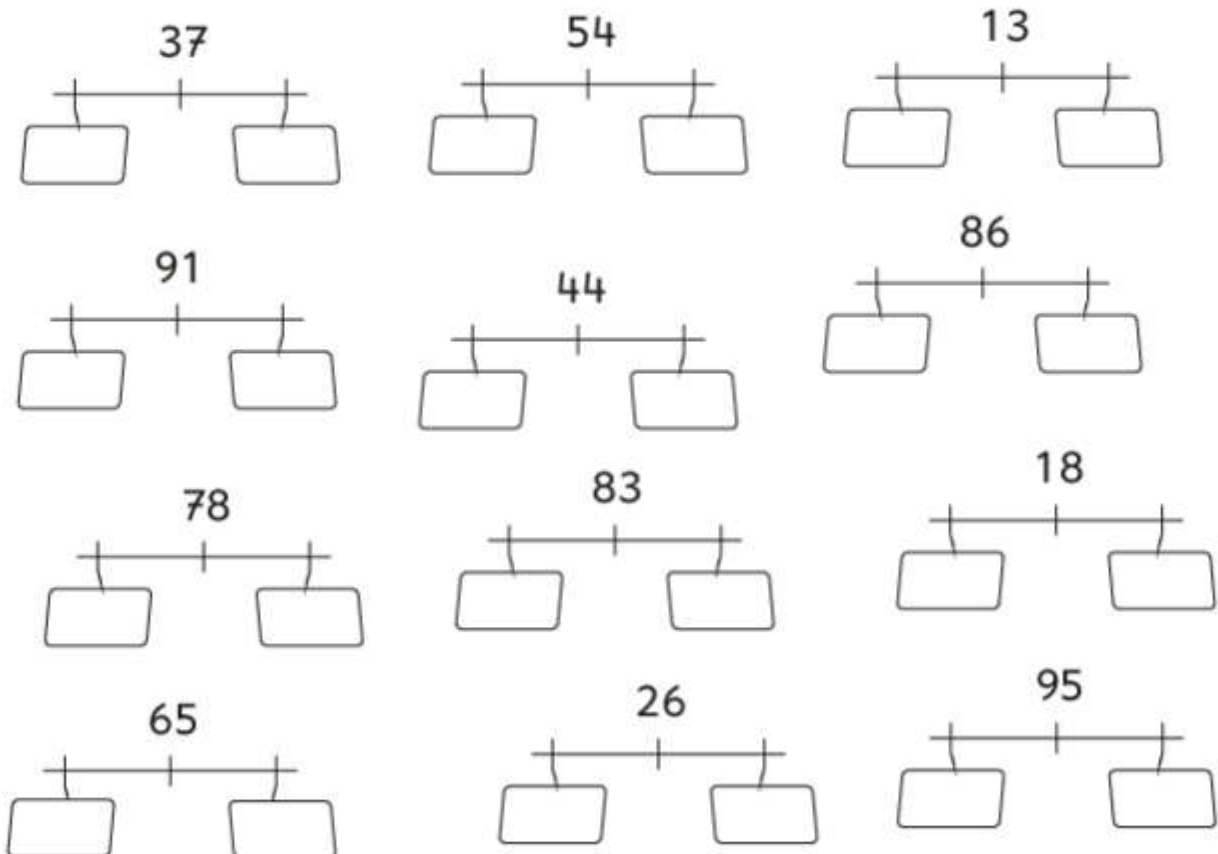
## Auf welche Zahlen zeigen die Pfeile ?



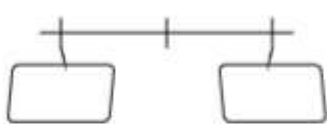
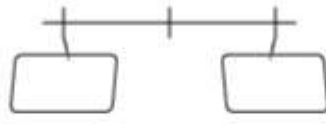
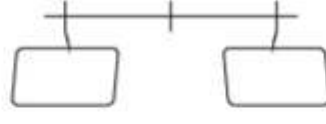
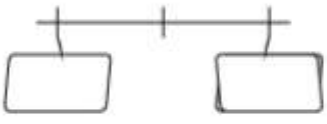
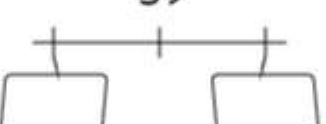

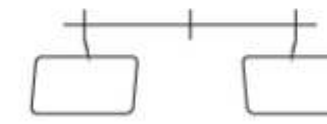
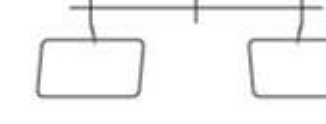


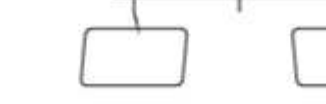

## Nachbarzahlen : Vorgänger und Nachfolger



## Nachbarzahlen : Vorgänger und Nachfolger

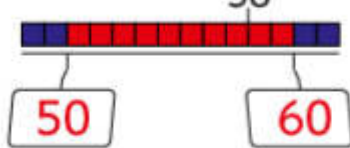
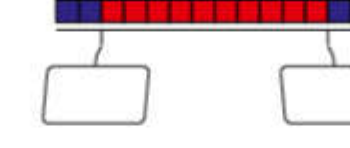
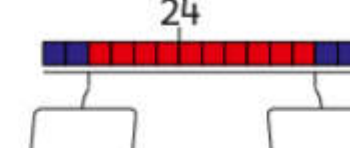
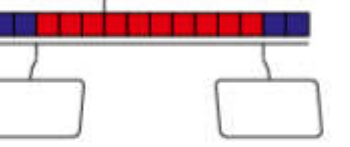
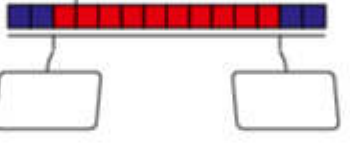
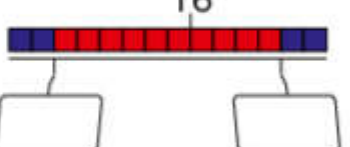

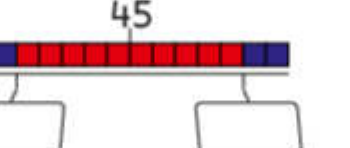
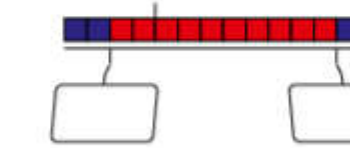
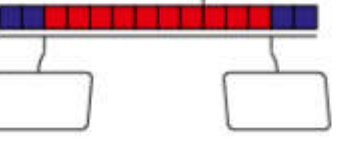
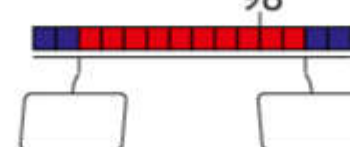



## Nachbarzahlen : Vorgänger und Nachfolger

79 	29 	89 
69 	59 	49 
60 	40 	90 
30 	70 	50 

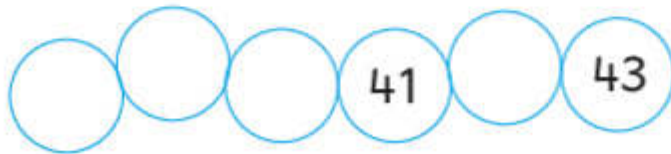
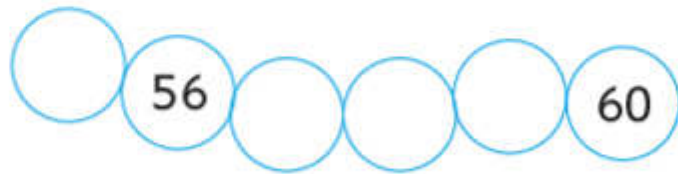





## Trage die Nachbarzehner ein.





58 	76 	24 
93 	31 	16 
83 	45 	62 
47 	98 	29 



Welche Zahlen fehlen in der Reihe ?



Welche Zahlen fehlen in der Reihe ?



Wie geht es weiter ?

32 , 33 , 34 , 35 , \_\_\_\_\_ , \_\_\_\_\_ , \_\_\_\_\_ , \_\_\_\_\_ , \_\_\_\_\_ , 41

54 , 55 , 56 , 57 , \_\_\_\_\_ , \_\_\_\_\_ , \_\_\_\_\_ , \_\_\_\_\_ , \_\_\_\_\_ , 63

76 , 77 , 78 , 79 , \_\_\_\_\_ , \_\_\_\_\_ , \_\_\_\_\_ , \_\_\_\_\_ , \_\_\_\_\_ , 85

48 , 47 , 46 , 45 , \_\_\_\_\_ , \_\_\_\_\_ , \_\_\_\_\_ , \_\_\_\_\_ , \_\_\_\_\_ , 39

84 , 83 , 82 , 81 , \_\_\_\_\_ , \_\_\_\_\_ , \_\_\_\_\_ , \_\_\_\_\_ , \_\_\_\_\_ , 75

62 , 61 , 60 , 59 , \_\_\_\_\_ , \_\_\_\_\_ , \_\_\_\_\_ , \_\_\_\_\_ , \_\_\_\_\_ , 53



Wie geht es weiter ?

53 , 55 , 57 , 59 , \_\_\_\_\_ , \_\_\_\_\_ , \_\_\_\_\_ , \_\_\_\_\_ , \_\_\_\_\_ , 71

26 , 28 , 30 , 32 , \_\_\_\_\_ , \_\_\_\_\_ , \_\_\_\_\_ , \_\_\_\_\_ , \_\_\_\_\_ , 44

75 , 77 , 79 , 81 , \_\_\_\_\_ , \_\_\_\_\_ , \_\_\_\_\_ , \_\_\_\_\_ , \_\_\_\_\_ , 93

71 , 69 , 67 , 65 , \_\_\_\_\_ , \_\_\_\_\_ , \_\_\_\_\_ , \_\_\_\_\_ , \_\_\_\_\_ , 53

44 , 42 , 40 , 38 , \_\_\_\_\_ , \_\_\_\_\_ , \_\_\_\_\_ , \_\_\_\_\_ , \_\_\_\_\_ , 26

99 , 97 , 95 , 93 , \_\_\_\_\_ , \_\_\_\_\_ , \_\_\_\_\_ , \_\_\_\_\_ , \_\_\_\_\_ , 81





Wie geht es weiter ?

15 , 20 , 25 , 30 , \_\_\_\_\_ , \_\_\_\_\_ , \_\_\_\_\_ , \_\_\_\_\_ , \_\_\_\_\_ , 60

90 , 85 , 80 , 75 , \_\_\_\_\_ , \_\_\_\_\_ , \_\_\_\_\_ , \_\_\_\_\_ , \_\_\_\_\_ , 45

30 , 33 , 36 , 39 , \_\_\_\_\_ , \_\_\_\_\_ , \_\_\_\_\_ , \_\_\_\_\_ , \_\_\_\_\_ , 57

87 , 84 , 81 , 78 , \_\_\_\_\_ , \_\_\_\_\_ , \_\_\_\_\_ , \_\_\_\_\_ , \_\_\_\_\_ , 60

12 , 16 , 20 , 24 , \_\_\_\_\_ , \_\_\_\_\_ , \_\_\_\_\_ , \_\_\_\_\_ , \_\_\_\_\_ , 48

60 , 56 , 52 , 48 , \_\_\_\_\_ , \_\_\_\_\_ , \_\_\_\_\_ , \_\_\_\_\_ , \_\_\_\_\_ , 24



Ordne die Zahlen nach der Größe.

Beginne mit der kleinsten Zahl.

10

80 70 10 30 90 50

30 60 20 50 70 40

80 50 60 90 40 10



# Ordne die Zahlen nach der Größe.

Beginne mit der kleinsten Zahl.

41

46 48 45 47 43 ~~41~~

72 79 74 71 77 73

93 96 97 98 94 92



# Umkreise immer 10.

Wie viele Zehner erhältst du? Wie viele Einer bleiben übrig?

Z	E	26
2	6	

Z	E	<input type="text"/>
<input type="text"/>	<input type="text"/>	

Z	E	<input type="text"/>
<input type="text"/>	<input type="text"/>	

Z	E	<input type="text"/>
<input type="text"/>	<input type="text"/>	

