



















## Verliebte Zahlen 2

①

|  |  |
|--|--|
|     |      |
| 6   | 7   |
|     |      |
| 3   | 5   |
|     |      |
| 2   | 4   |
|   |    |
| 9  | 1  |

②


③

|                    |                    |                    |
|--------------------|--------------------|--------------------|
| $6 + \square = 10$ | $\square + 5 = 10$ | $2 + \square = 10$ |
| $4 + \square = 10$ | $\square + 1 = 10$ | $3 + \square = 10$ |
| $7 + \square = 10$ | $\square + 8 = 10$ | $6 + \square = 10$ |




## Bis zur 10, dann weiter

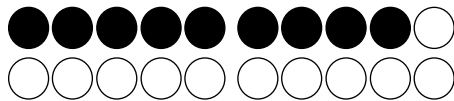
①



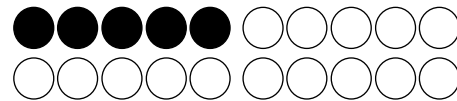
$$6 + 8 = \underline{\quad}$$



$$8 + 5 = \underline{\quad}$$




$$9 + 7 = \underline{\quad}$$




$$5 + 6 = \underline{\quad}$$

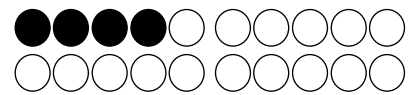
②




$$8 + 4 = \underline{\quad}$$




$$5 + 9 = \underline{\quad}$$




$$4 + 7 = \underline{\quad}$$




$$7 + 6 = \underline{\quad}$$



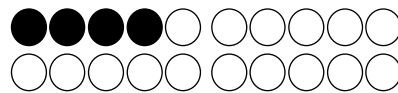
$$9 + 5 = \underline{\quad}$$




$$6 + 7 = \underline{\quad}$$



$$5 + 8 = \underline{\quad}$$



$$4 + 8 = \underline{\quad}$$




$$8 + 5 = \underline{\quad}$$




## Bis zur 10, dann weiter 2

①



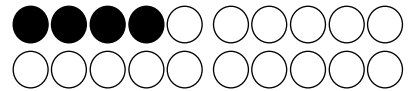
$8 + 5 = \underline{\quad}$

$8 + \underline{\quad} + \underline{\quad} = \underline{\quad}$




$5 + 7 = \underline{\quad}$

$5 + \underline{\quad} + \underline{\quad} = \underline{\quad}$




$4 + 9 = \underline{\quad}$

$4 + \underline{\quad} + \underline{\quad} = \underline{\quad}$




$7 + 4 = \underline{\quad}$

$7 + \underline{\quad} + \underline{\quad} = \underline{\quad}$



$9 + 6 = \underline{\quad}$

$9 + \underline{\quad} + \underline{\quad} = \underline{\quad}$



$6 + 8 = \underline{\quad}$

$6 + \underline{\quad} + \underline{\quad} = \underline{\quad}$

②

$5 + 8 = \underline{\quad}$

$5 + \underline{\quad} + \underline{\quad} = \underline{\quad}$

$4 + 7 = \underline{\quad}$

$4 + \underline{\quad} + \underline{\quad} = \underline{\quad}$

$8 + 3 = \underline{\quad}$

$8 + \underline{\quad} + \underline{\quad} = \underline{\quad}$

$6 + 5 = \underline{\quad}$

$6 + \underline{\quad} + \underline{\quad} = \underline{\quad}$

$3 + 9 = \underline{\quad}$

$3 + \underline{\quad} + \underline{\quad} = \underline{\quad}$

$7 + 5 = \underline{\quad}$

$7 + \underline{\quad} + \underline{\quad} = \underline{\quad}$

③

$4 + 8 = \underline{\quad}$

$4 + \underline{\quad} + \underline{\quad} = \underline{\quad}$

$2 + 9 = \underline{\quad}$

$2 + \underline{\quad} + \underline{\quad} = \underline{\quad}$

$6 + 5 = \underline{\quad}$

$6 + \underline{\quad} + \underline{\quad} = \underline{\quad}$

$5 + 7 = \underline{\quad}$

$5 + \underline{\quad} + \underline{\quad} = \underline{\quad}$

$3 + 8 = \underline{\quad}$

$3 + \underline{\quad} + \underline{\quad} = \underline{\quad}$

$7 + 6 = \underline{\quad}$

$7 + \underline{\quad} + \underline{\quad} = \underline{\quad}$

$9 + 8 = \underline{\quad}$

$9 + \underline{\quad} + \underline{\quad} = \underline{\quad}$

$4 + 7 = \underline{\quad}$

$4 + \underline{\quad} + \underline{\quad} = \underline{\quad}$

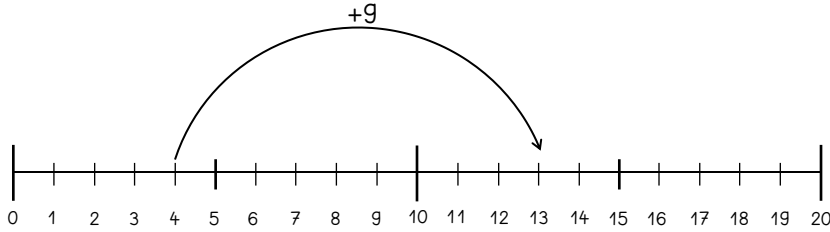
$8 + 5 = \underline{\quad}$

$8 + \underline{\quad} + \underline{\quad} = \underline{\quad}$



# Über die 10 am Zahlenstrahl

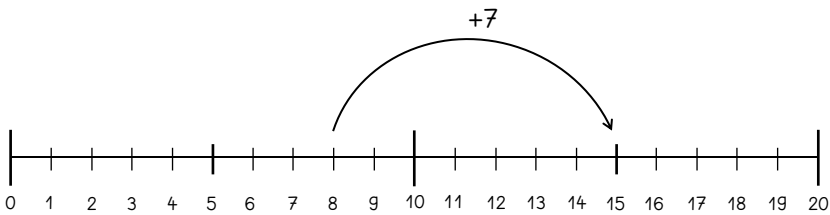
①



$$4 + 9 = \underline{\quad}$$

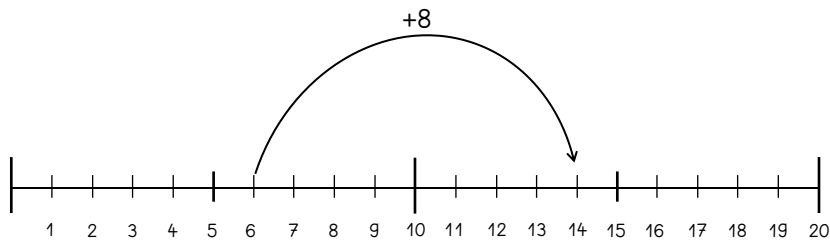
$4 + \underline{\quad} + \underline{\quad} = \underline{\quad}$

②



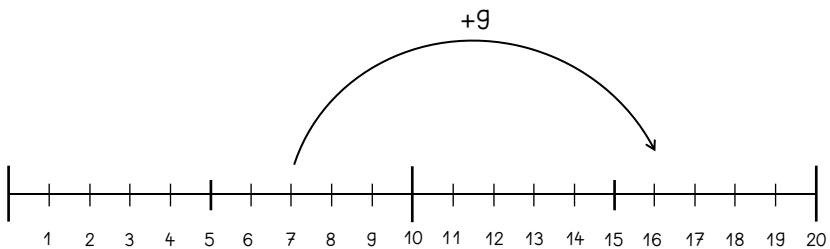
$$8 + 7 = \underline{\quad}$$

$8 + \underline{\quad} + \underline{\quad} = \underline{\quad}$



$$6 + 8 = \underline{\quad}$$

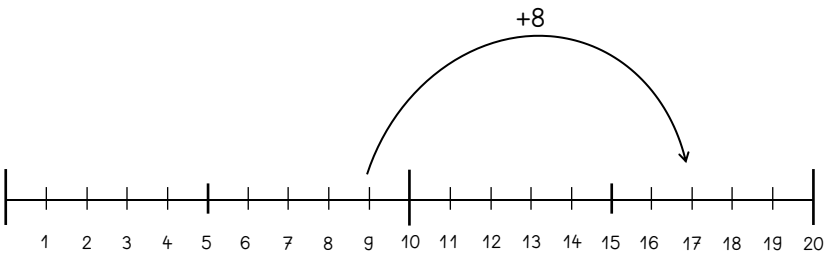
$6 + \underline{\quad} + \underline{\quad} = \underline{\quad}$



$$7 + 9 = \underline{\quad}$$

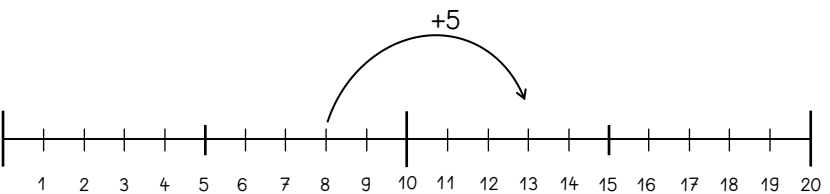
$7 + \underline{\quad} + \underline{\quad} = \underline{\quad}$

③



$$9 + 8 = \underline{\quad}$$

$9 + \underline{\quad} + \underline{\quad} = \underline{\quad}$



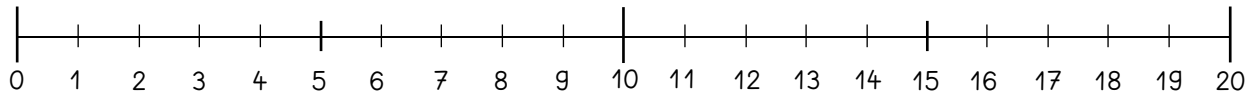
$$8 + 5 = \underline{\quad}$$

$8 + \underline{\quad} + \underline{\quad} = \underline{\quad}$



## Über die 10 am Zahlenstrahl

①



$$9 + 5 = \underline{\quad}$$

$$9 + \text{heart} + \underline{\quad} = \underline{\quad}$$

②

$$9 + 8 = \underline{\quad}$$

$$9 + \text{heart} + \underline{\quad} = \underline{\quad}$$

$$4 + 6 = \underline{\quad}$$

$$4 + \text{heart} + \underline{\quad} = \underline{\quad}$$

$$9 + 3 = \underline{\quad}$$

$$9 + \text{heart} + \underline{\quad} = \underline{\quad}$$

$$7 + 5 = \underline{\quad}$$

$$7 + \text{heart} + \underline{\quad} = \underline{\quad}$$

$$3 + 8 = \underline{\quad}$$

$$3 + \text{heart} + \underline{\quad} = \underline{\quad}$$

$$6 + 5 = \underline{\quad}$$

$$6 + \text{heart} + \underline{\quad} = \underline{\quad}$$

$$6 + 7 = \underline{\quad}$$

$$6 + \text{heart} + \underline{\quad} = \underline{\quad}$$

$$5 + 9 = \underline{\quad}$$

$$5 + \text{heart} + \underline{\quad} = \underline{\quad}$$

$$7 + 4 = \underline{\quad}$$

$$7 + \text{heart} + \underline{\quad} = \underline{\quad}$$

③

$$7 + 6 = \underline{\quad}$$

$$7 + \underline{\quad} + \underline{\quad} = \underline{\quad}$$

$$3 + 9 = \underline{\quad}$$

$$3 + \underline{\quad} + \underline{\quad} = \underline{\quad}$$

$$6 + 8 = \underline{\quad}$$

$$6 + \underline{\quad} + \underline{\quad} = \underline{\quad}$$

$$5 + 6 = \underline{\quad}$$

$$5 + \underline{\quad} + \underline{\quad} = \underline{\quad}$$

$$5 + 8 = \underline{\quad}$$

$$5 + \underline{\quad} + \underline{\quad} = \underline{\quad}$$

$$7 + 5 = \underline{\quad}$$

$$7 + \underline{\quad} + \underline{\quad} = \underline{\quad}$$

$$4 + 7 = \underline{\quad}$$

$$4 + \underline{\quad} + \underline{\quad} = \underline{\quad}$$

$$9 + 3 = \underline{\quad}$$

$$9 + \underline{\quad} + \underline{\quad} = \underline{\quad}$$

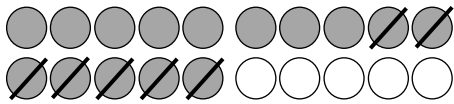
$$6 + 9 = \underline{\quad}$$

$$6 + \underline{\quad} + \underline{\quad} = \underline{\quad}$$



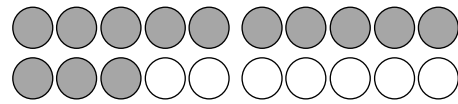
## Zurück zur 10, dann weiter

①



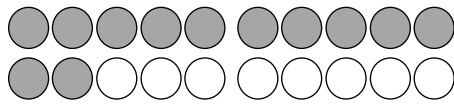
$$15 - 7 = \underline{\quad}$$

$$15 - \underline{\quad} - \underline{\quad} = \underline{\quad}$$



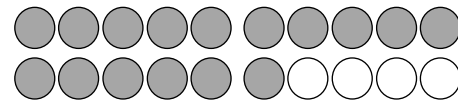
$$13 - 6 = \underline{\quad}$$

$$13 - \underline{\quad} - \underline{\quad} = \underline{\quad}$$



$$12 - 5 = \underline{\quad}$$

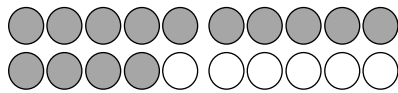
$$12 - \underline{\quad} - \underline{\quad} = \underline{\quad}$$



$$16 - 9 = \underline{\quad}$$

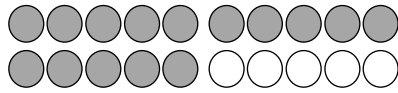
$$16 - \underline{\quad} - \underline{\quad} = \underline{\quad}$$

②



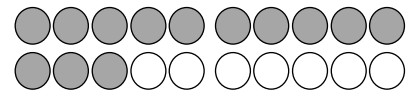
$$14 - 7 = \underline{\quad}$$

$$14 - \underline{\quad} - \underline{\quad} = \underline{\quad}$$




$$15 - 6 = \underline{\quad}$$

$$15 - \underline{\quad} - \underline{\quad} = \underline{\quad}$$



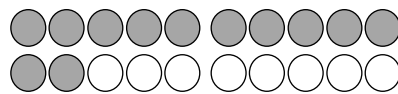
$$13 - 5 = \underline{\quad}$$

$$13 - \underline{\quad} - \underline{\quad} = \underline{\quad}$$



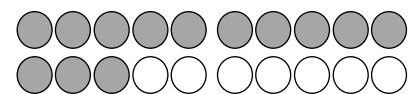
$$17 - 8 = \underline{\quad}$$

$$17 - \underline{\quad} - \underline{\quad} = \underline{\quad}$$




$$12 - 7 = \underline{\quad}$$

$$12 - \underline{\quad} - \underline{\quad} = \underline{\quad}$$




$$13 - 9 = \underline{\quad}$$

$$13 - \underline{\quad} - \underline{\quad} = \underline{\quad}$$




$$11 - 6 = \underline{\quad}$$

$$11 - \underline{\quad} - \underline{\quad} = \underline{\quad}$$



$$12 - 8 = \underline{\quad}$$

$$12 - \underline{\quad} - \underline{\quad} = \underline{\quad}$$



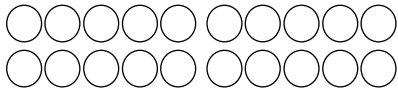
$$14 - 7 = \underline{\quad}$$

$$14 - \underline{\quad} - \underline{\quad} = \underline{\quad}$$



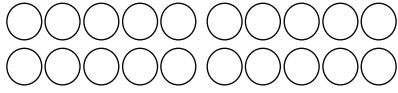
## Zurück zur 10, dann weiter 2

①



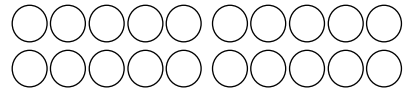
$$16 - 7 = \underline{\quad}$$

$$16 - \underline{\quad} - \underline{\quad} = \underline{\quad}$$



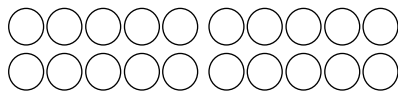
$$13 - 6 = \underline{\quad}$$

$$13 - \underline{\quad} - \underline{\quad} = \underline{\quad}$$



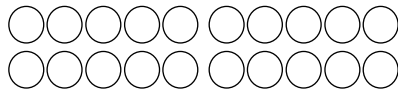
$$11 - 5 = \underline{\quad}$$

$$11 - \underline{\quad} - \underline{\quad} = \underline{\quad}$$



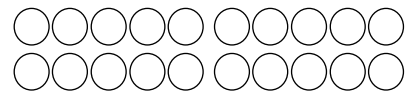
$$15 - 8 = \underline{\quad}$$

$$15 - \underline{\quad} - \underline{\quad} = \underline{\quad}$$



$$12 - 7 = \underline{\quad}$$

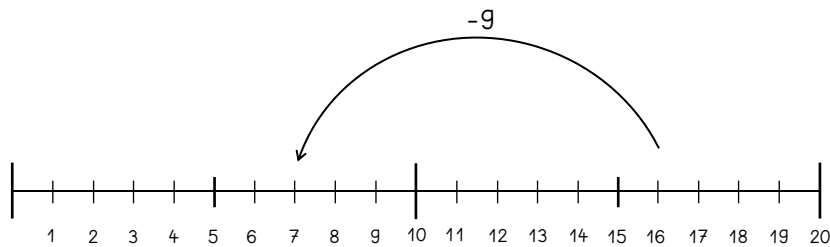
$$12 - \underline{\quad} - \underline{\quad} = \underline{\quad}$$



$$13 - 5 = \underline{\quad}$$

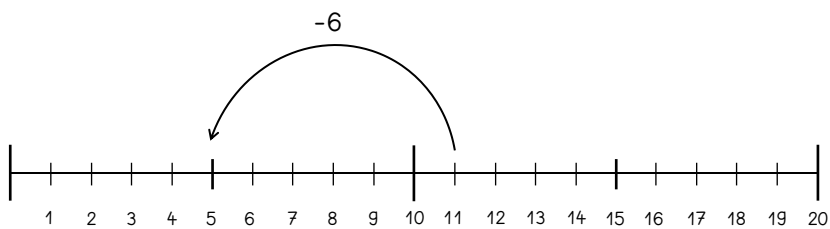
$$13 - \underline{\quad} - \underline{\quad} = \underline{\quad}$$

②



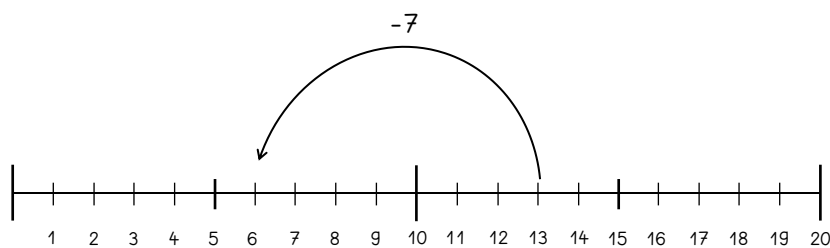
$$16 - 9 = \underline{\quad}$$

$$16 - \underline{\quad} - \underline{\quad} = \underline{\quad}$$



$$11 - 6 = \underline{\quad}$$

$$11 - \underline{\quad} - \underline{\quad} = \underline{\quad}$$



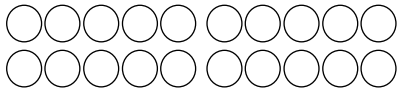
$$13 - 7 = \underline{\quad}$$

$$13 - \underline{\quad} - \underline{\quad} = \underline{\quad}$$



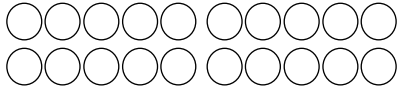
## Zurück zur 10, dann weiter 3

①



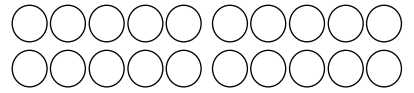
$11 - 7 = \underline{\quad}$

$11 - \underline{\quad} - \underline{\quad} = \underline{\quad}$



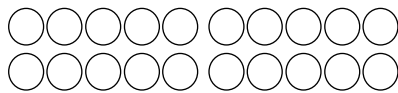
$14 - 8 = \underline{\quad}$

$14 - \underline{\quad} - \underline{\quad} = \underline{\quad}$



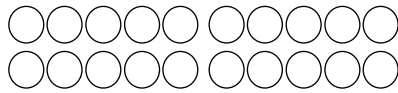
$13 - 5 = \underline{\quad}$

$13 - \underline{\quad} - \underline{\quad} = \underline{\quad}$



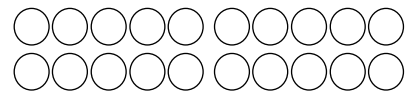
$16 - 8 = \underline{\quad}$

$16 - \underline{\quad} - \underline{\quad} = \underline{\quad}$



$15 - 7 = \underline{\quad}$

$15 - \underline{\quad} - \underline{\quad} = \underline{\quad}$



$13 - 8 = \underline{\quad}$

$13 - \underline{\quad} - \underline{\quad} = \underline{\quad}$

②

$12 - 8 = \underline{\quad}$

$12 - \underline{\quad} - \underline{\quad} = \underline{\quad}$

$13 - 6 = \underline{\quad}$

$13 - \underline{\quad} - \underline{\quad} = \underline{\quad}$

$15 - 9 = \underline{\quad}$

$15 - \underline{\quad} - \underline{\quad} = \underline{\quad}$

$11 - 6 = \underline{\quad}$

$11 - \underline{\quad} - \underline{\quad} = \underline{\quad}$

$14 - 5 = \underline{\quad}$

$14 - \underline{\quad} - \underline{\quad} = \underline{\quad}$

$17 - 8 = \underline{\quad}$

$17 - \underline{\quad} - \underline{\quad} = \underline{\quad}$

$12 - 4 = \underline{\quad}$

$12 - \underline{\quad} - \underline{\quad} = \underline{\quad}$

$16 - 7 = \underline{\quad}$

$16 - \underline{\quad} - \underline{\quad} = \underline{\quad}$

$18 - 9 = \underline{\quad}$

$18 - \underline{\quad} - \underline{\quad} = \underline{\quad}$

$14 - 6 = \underline{\quad}$

$14 - \underline{\quad} - \underline{\quad} = \underline{\quad}$

$11 - 5 = \underline{\quad}$

$11 - \underline{\quad} - \underline{\quad} = \underline{\quad}$

$16 - 7 = \underline{\quad}$

$16 - \underline{\quad} - \underline{\quad} = \underline{\quad}$

$12 - 7 = \underline{\quad}$

$12 - \underline{\quad} - \underline{\quad} = \underline{\quad}$

$13 - 5 = \underline{\quad}$

$13 - \underline{\quad} - \underline{\quad} = \underline{\quad}$

$12 - 3 = \underline{\quad}$

$12 - \underline{\quad} - \underline{\quad} = \underline{\quad}$





## Wir üben fleißig

①

$11 + 5 = \underline{\quad}$

$4 + 8 = \underline{\quad}$

$17 + 1 = \underline{\quad}$

$12 + 5 = \underline{\quad}$

$1 + 5 = \underline{\quad}$

$16 + 2 = \underline{\quad}$

$15 + 5 = \underline{\quad}$

$13 + 2 = \underline{\quad}$

$17 + 2 = \underline{\quad}$

$10 + 5 = \underline{\quad}$

$6 + 10 = \underline{\quad}$

$10 + 10 = \underline{\quad}$

$1 + 16 = \underline{\quad}$

$2 + 13 = \underline{\quad}$

$15 + 1 = \underline{\quad}$

$9 + 1 = \underline{\quad}$

$6 + 8 = \underline{\quad}$

$16 + 1 = \underline{\quad}$

✓ 18 20 14 10 17 20 6 17 16 12 15 15 15 16 19 17 16 18

②

$19 - 14 = \underline{\quad}$

$16 - 6 = \underline{\quad}$

$14 - 2 = \underline{\quad}$

$20 - 1 = \underline{\quad}$

$19 - 12 = \underline{\quad}$

$18 - 3 = \underline{\quad}$

$15 - 11 = \underline{\quad}$

$16 - 3 = \underline{\quad}$

$20 - 7 = \underline{\quad}$

$15 - 10 = \underline{\quad}$

$20 - 6 = \underline{\quad}$

$18 - 7 = \underline{\quad}$

$19 - 15 = \underline{\quad}$

$17 - 3 = \underline{\quad}$

$15 - 13 = \underline{\quad}$

$19 - 3 = \underline{\quad}$

$14 - 10 = \underline{\quad}$

$15 - 1 = \underline{\quad}$

✓ 4 11 5 2 4 14 13 14 7 10 12 14 5 15 13 19 16 4

③

$18 - 4 = \underline{\quad}$

$15 + 2 = \underline{\quad}$

$18 - 4 = \underline{\quad}$

$17 + 1 = \underline{\quad}$

$15 - 1 = \underline{\quad}$

$13 + 2 = \underline{\quad}$

$8 + 7 = \underline{\quad}$

$2 + 12 = \underline{\quad}$

$18 - 3 = \underline{\quad}$

$16 - 9 = \underline{\quad}$

$19 - 5 = \underline{\quad}$

$16 + 4 = \underline{\quad}$

$15 - 4 = \underline{\quad}$

$3 + 14 = \underline{\quad}$

$9 + 2 = \underline{\quad}$

$3 + 2 = \underline{\quad}$

$17 - 16 = \underline{\quad}$

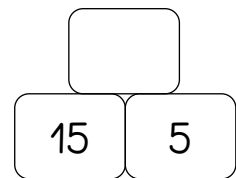
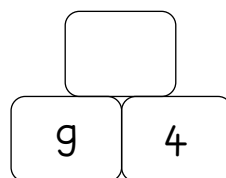
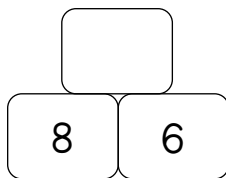
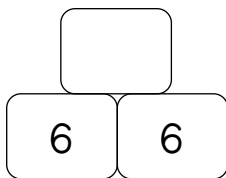
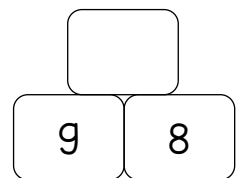
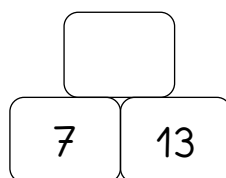
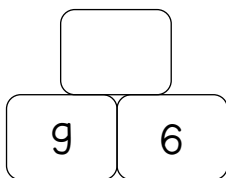
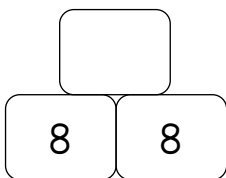
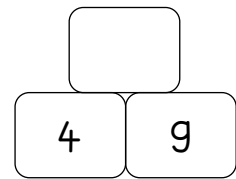
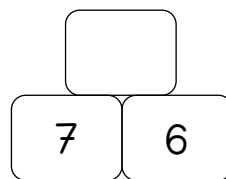
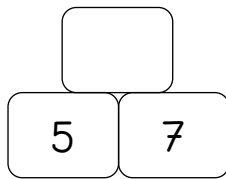
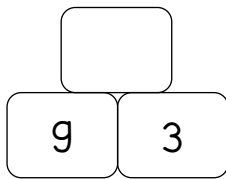
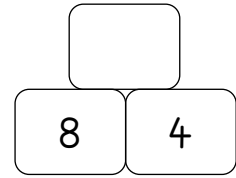
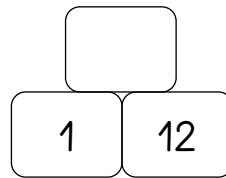
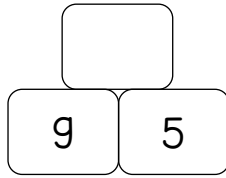
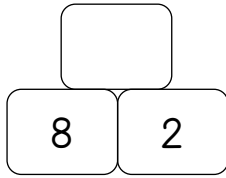
$18 - 13 = \underline{\quad}$

✓ 14 14 20 15 14 14 1 11 5 17 18 17 14 5 7 11 15 15

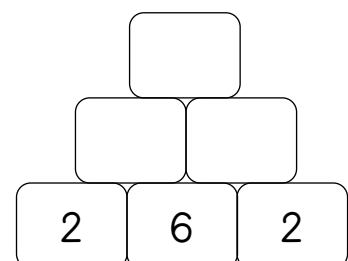
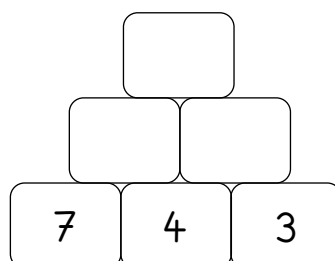
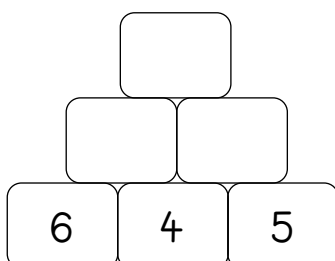
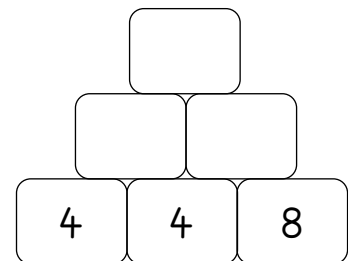
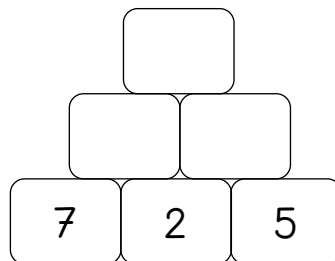
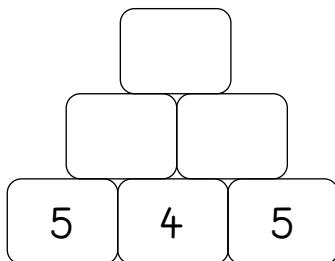


## Rechenmauern

①



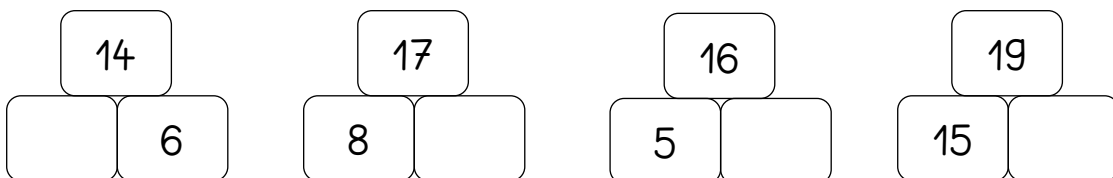
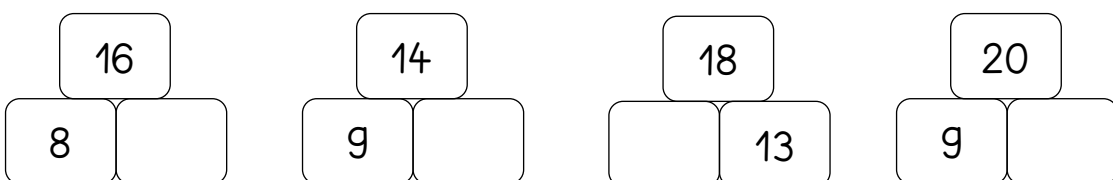
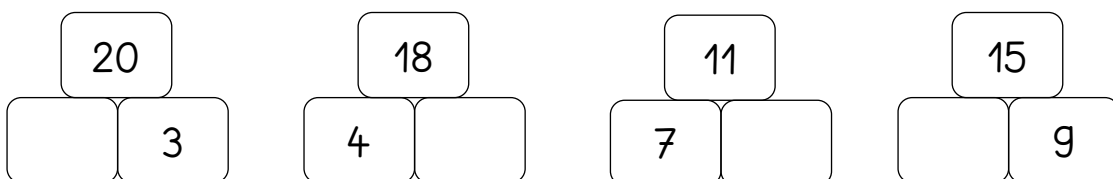
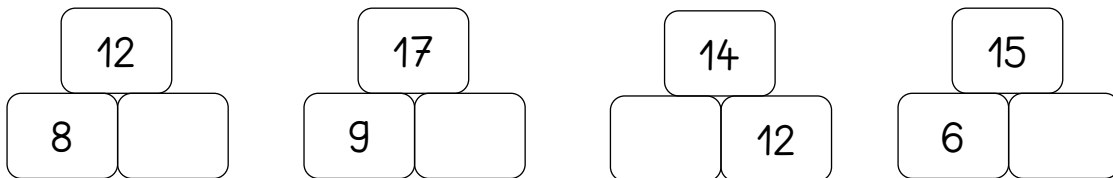
②



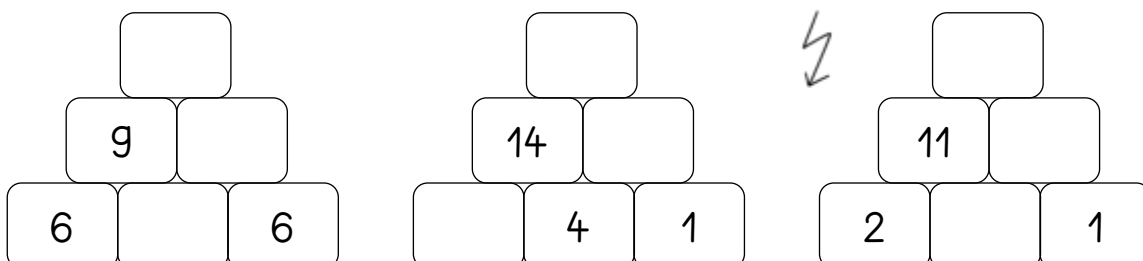
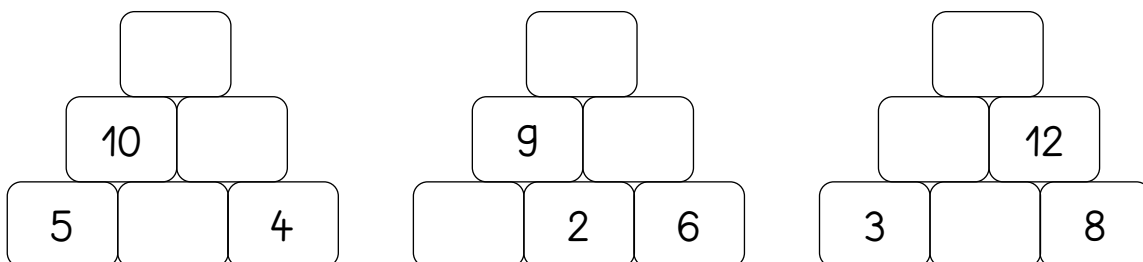


## Rechenmauern 2

①




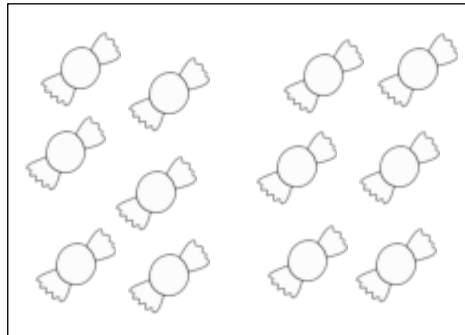

②





# Wir teilen gerecht

①



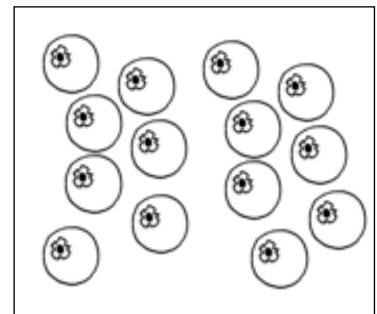
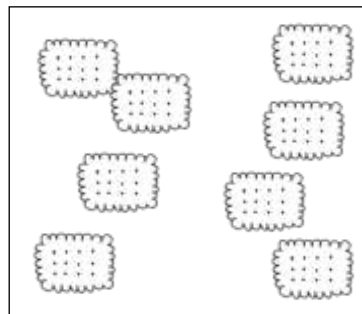
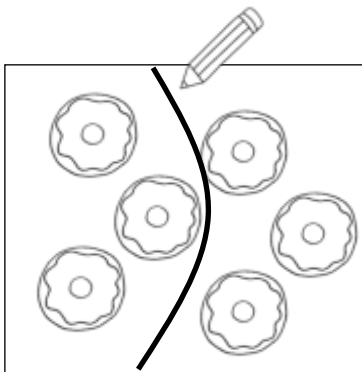
zusammen

\_\_\_\_\_ = \_\_\_\_\_ + \_\_\_\_\_

zusammen

\_\_\_\_\_ = \_\_\_\_\_ + \_\_\_\_\_

②



6 = \_\_\_\_\_ + \_\_\_\_\_

8 = \_\_\_\_\_ + \_\_\_\_\_

14 = \_\_\_\_\_ + \_\_\_\_\_

③

4 = \_\_\_\_\_ + \_\_\_\_\_

10 = \_\_\_\_\_ + \_\_\_\_\_

16 = \_\_\_\_\_ + \_\_\_\_\_

6 = \_\_\_\_\_ + \_\_\_\_\_

12 = \_\_\_\_\_ + \_\_\_\_\_

18 = \_\_\_\_\_ + \_\_\_\_\_

8 = \_\_\_\_\_ + \_\_\_\_\_

14 = \_\_\_\_\_ + \_\_\_\_\_

20 = \_\_\_\_\_ + \_\_\_\_\_

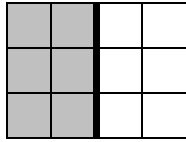
④

|            |   |    |    |   |    |   |   |    |    |    |
|------------|---|----|----|---|----|---|---|----|----|----|
| Zahl       | 2 | 18 | 10 | 8 | 12 | 6 | 4 | 16 | 20 | 14 |
| die Hälfte | 1 |    |    |   |    |   |   |    |    |    |

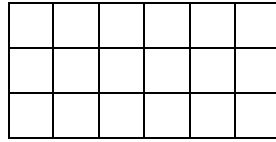


# Halbieren

①




$12 = \_ + \_$



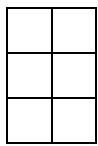
$18 = \_ + \_$



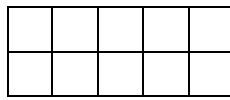
$8 = \_ + \_$   
-



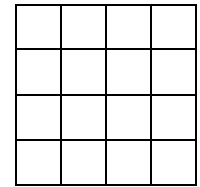
$20 = \_ + \_$



$6 = \_ + \_$



$10 = \_ + \_$



$16 = \_ + \_$

②

|            |    |    |    |    |    |    |   |   |   |   |
|------------|----|----|----|----|----|----|---|---|---|---|
| Zahl       | 20 | 18 | 16 | 14 | 12 | 10 | 8 | 6 | 4 | 2 |
| die Hälfte | 10 |    |    |    |    |    |   |   |   |   |

③

- $4 = \_ + \_$
- $16 = \_ + \_$
- $8 = \_ + \_$
- $6 = \_ + \_$
- $12 = \_ + \_$
- $20 = \_ + \_$
- $2 = \_ + \_$
- $14 = \_ + \_$
- $18 = \_ + \_$

- $6 = \_ + \_$
- $18 = \_ + \_$
- $4 = \_ + \_$
- $12 = \_ + \_$
- $8 = \_ + \_$
- $16 = \_ + \_$
- $20 = \_ + \_$
- $2 = \_ + \_$
- $14 = \_ + \_$

④

|    |  |
|----|--|
|    |  |
| 12 |  |
| 20 |  |
| 10 |  |
| 8  |  |
| 4  |  |
| 14 |  |
| 18 |  |
| 6  |  |



# Gerade und ungerade Zahlen


①

6      7      8      9      10      11

②

12      13      14      15      16      17

③

 gerade ✓ = grün  
 ungerade X = blau



## 3 Zahlen - 4 Aufgaben

①



$$\begin{array}{l} \square + \square = \square \\ \square - \square = \square \\ \square + \square = \square \\ \square - \square = \square \end{array}$$



$$\begin{array}{l} \square + \square = \square \\ \square - \square = \square \\ \square + \square = \square \\ \square - \square = \square \end{array}$$



$$\begin{array}{l} \square + \square = \square \\ \square - \square = \square \\ \square + \square = \square \\ \square - \square = \square \end{array}$$

②



$$\begin{array}{l} \square + \square = \square \\ \square - \square = \square \\ \square + \square = \square \\ \square - \square = \square \end{array}$$



$$\begin{array}{l} \square + \square = \square \\ \square - \square = \square \\ \square + \square = \square \\ \square - \square = \square \end{array}$$



$$\begin{array}{l} \square + \square = \square \\ \square - \square = \square \\ \square + \square = \square \\ \square - \square = \square \end{array}$$

③



$$\begin{array}{l} \square + \square = \square \\ \square - \square = \square \\ \square + \square = \square \\ \square - \square = \square \end{array}$$



$$\begin{array}{l} \square + \square = \square \\ \square - \square = \square \\ \square + \square = \square \\ \square - \square = \square \end{array}$$



$$\begin{array}{l} \square + \square = \square \\ \square - \square = \square \\ \square + \square = \square \\ \square - \square = \square \end{array}$$



## Wiederholung

①

|            |    |    |    |    |    |    |   |   |   |   |
|------------|----|----|----|----|----|----|---|---|---|---|
| Zahl       | 20 | 18 | 16 | 14 | 12 | 10 | 8 | 6 | 4 | 2 |
| die Hälfte | 10 |    |    |    |    |    |   |   |   |   |

|              |   |   |   |    |   |   |   |   |   |   |
|--------------|---|---|---|----|---|---|---|---|---|---|
| Zahl         | 3 | 7 | 6 | 10 | 1 | 8 | 9 | 2 | 4 | 5 |
| das Doppelte |   |   |   |    |   |   |   |   |   |   |

②



$$\begin{array}{l} \square + \square = \square \\ \square - \square = \square \\ \square + \square = \square \\ \square - \square = \square \end{array}$$



$$\begin{array}{l} \square + \square = \square \\ \square - \square = \square \\ \square + \square = \square \\ \square - \square = \square \end{array}$$



$$\begin{array}{l} \square + \square = \square \\ \square - \square = \square \\ \square + \square = \square \\ \square - \square = \square \end{array}$$

③

$17 + 2 = \underline{\quad}$

$18 - 4 = \underline{\quad}$

$10 - 1 = \underline{\quad}$

$11 + 2 = \underline{\quad}$

$3 + 12 = \underline{\quad}$

$12 - 3 = \underline{\quad}$

$17 - 5 = \underline{\quad}$

$19 - 4 = \underline{\quad}$

$13 + 4 = \underline{\quad}$

$14 + 2 = \underline{\quad}$

$12 - 6 = \underline{\quad}$

$13 - 8 = \underline{\quad}$



12 5 19 13 15 17 15 9 9 14 6 16

④

|    |  |
|----|--|
| 20 |  |
| 5  |  |
| 20 |  |
| 11 |  |
| 7  |  |
| 4  |  |
| 15 |  |
| 19 |  |
| 12 |  |





Name: \_\_\_\_\_



# Wie spät ist es?

①



\_\_ Uhr



\_\_ Uhr



\_\_ Uhr



\_\_ Uhr



\_\_ Uhr



\_\_ Uhr



\_\_ Uhr



\_\_ Uhr



\_\_ Uhr



\_\_ Uhr

②



\_\_ Uhr



\_\_ Uhr



\_\_ Uhr



\_\_ Uhr



\_\_ Uhr



\_\_ Uhr



\_\_ Uhr



\_\_ Uhr



\_\_ Uhr



\_\_ Uhr



\_\_ Uhr



\_\_ Uhr



\_\_ Uhr



\_\_ Uhr



\_\_ Uhr



Name: \_\_\_\_\_



## Ganze Stunden

①



\_\_ Uhr



\_\_ Uhr



\_\_ Uhr



\_\_ Uhr



\_\_ Uhr



\_\_ Uhr



\_\_ Uhr



\_\_ Uhr



\_\_ Uhr

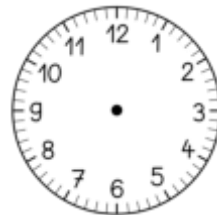


\_\_ Uhr

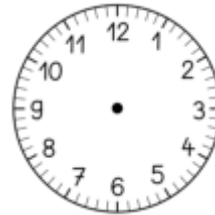
②



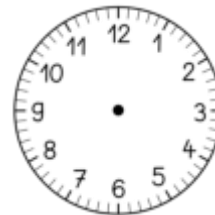
7 Uhr



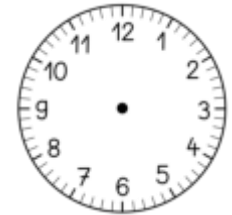
12 Uhr



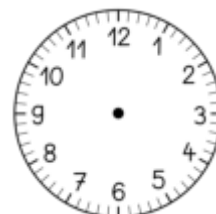
6 Uhr



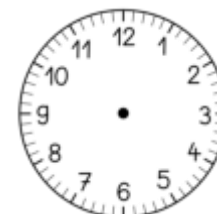
7 Uhr



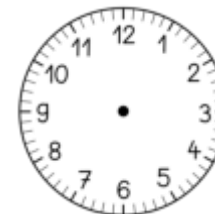
2 Uhr



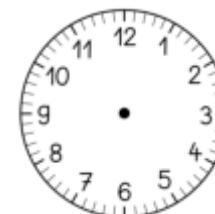
5 Uhr



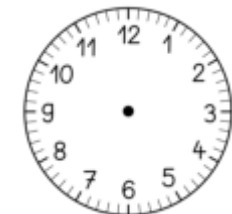
9 Uhr



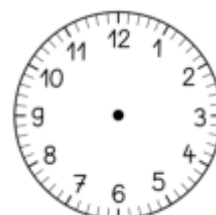
11 Uhr



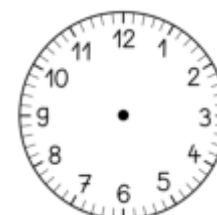
4 Uhr



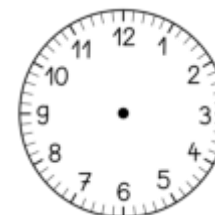
6 Uhr



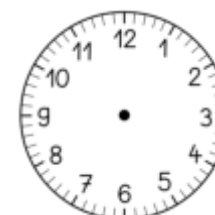
7 Uhr



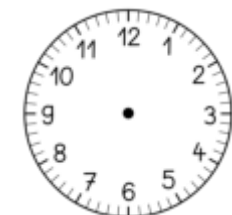
1 Uhr



12 Uhr



3 Uhr



11 Uhr



Name: \_\_\_\_\_




## Ganze Stunden 2

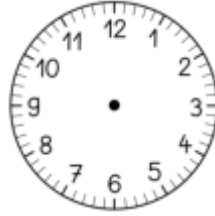
①



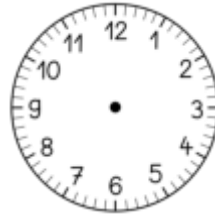
9 Uhr



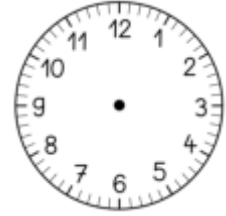
3 Uhr



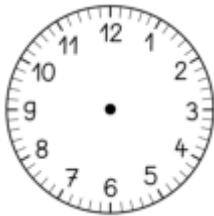
8 Uhr




7 Uhr



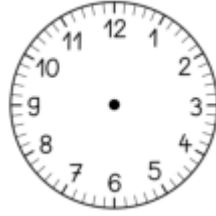
11 Uhr



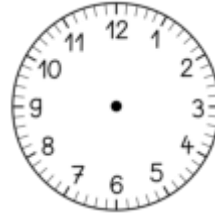
5 Uhr



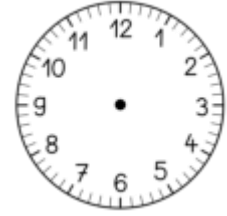
12 Uhr



9 Uhr

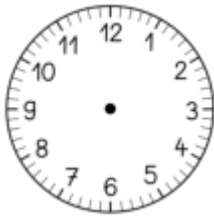


5 Uhr

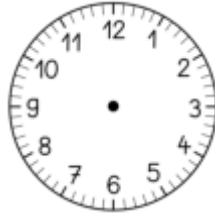


6 Uhr

②



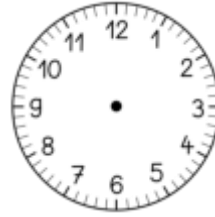
1 Uhr



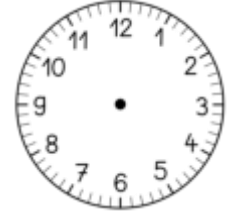
7 Uhr



11 Uhr



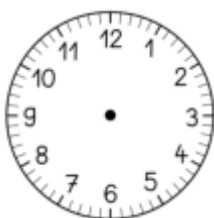


6 Uhr



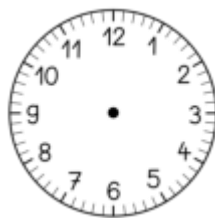
4 Uhr

③

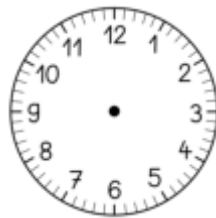
Unser Vormittag



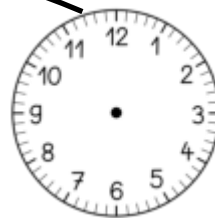
7 Uhr



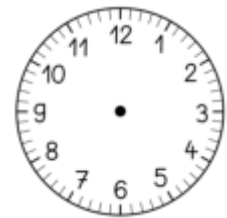
8 Uhr



9 Uhr



11 Uhr



12 Uhr



Name: \_\_\_\_\_



# Die Zeit vergeht

h = Stunde

①



2 h



\_\_ Uhr

\_\_ Uhr



3 h



\_\_ Uhr

\_\_ Uhr



= h



\_\_ Uhr

\_\_ Uhr



= h



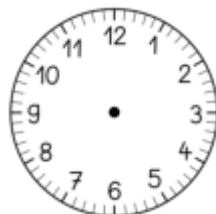
\_\_ Uhr

\_\_ Uhr

②



7 h

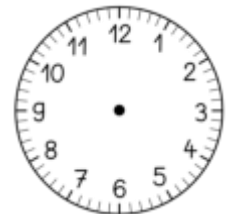


\_\_ Uhr

\_\_ Uhr



5 h

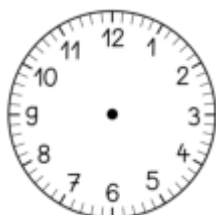


\_\_ Uhr

\_\_ Uhr



3 h

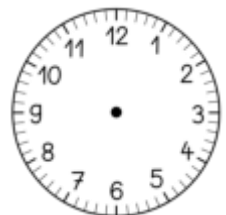


\_\_ Uhr

\_\_ Uhr



11 h



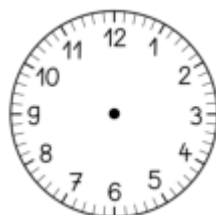
\_\_ Uhr

\_\_ Uhr

③



7 h

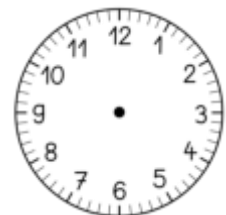


\_\_ Uhr

\_\_ Uhr



9 h



\_\_ Uhr

\_\_ Uhr

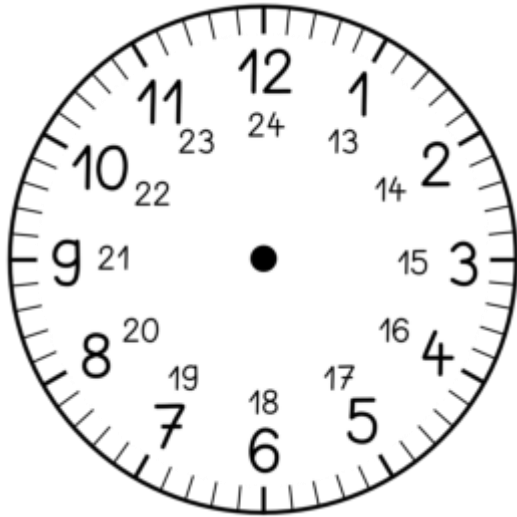


Name: \_\_\_\_\_



# Der Tag hat 24 Stunden

①



\_\_\_ Uhr

\_\_\_ Uhr



\_\_\_ Uhr

\_\_\_ Uhr



\_\_\_ Uhr

\_\_\_ Uhr



\_\_\_ Uhr

\_\_\_ Uhr



\_\_\_ Uhr

\_\_\_ Uhr

②



\_\_\_ Uhr

\_\_\_ Uhr



\_\_\_ Uhr

\_\_\_ Uhr



\_\_\_ Uhr

\_\_\_ Uhr



\_\_\_ Uhr

\_\_\_ Uhr



\_\_\_ Uhr

\_\_\_ Uhr



\_\_\_ Uhr

\_\_\_ Uhr



\_\_\_ Uhr

\_\_\_ Uhr



\_\_\_ Uhr

\_\_\_ Uhr



\_\_\_ Uhr

\_\_\_ Uhr



\_\_\_ Uhr

\_\_\_ Uhr

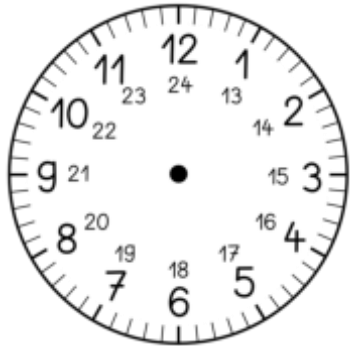


Name: \_\_\_\_\_



# Der Tag hat 24 Stunden

①



\_\_\_ Uhr  
\_\_\_ Uhr

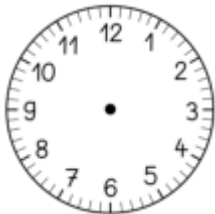


\_\_\_ Uhr  
\_\_\_ Uhr

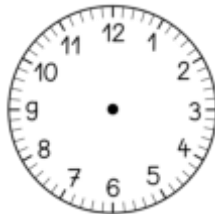


\_\_\_ Uhr  
\_\_\_ Uhr

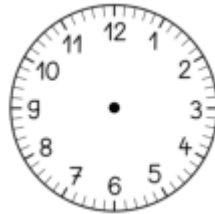
②



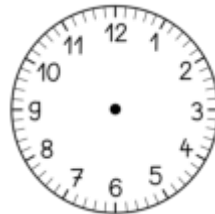
5 Uhr  
\_\_\_ Uhr



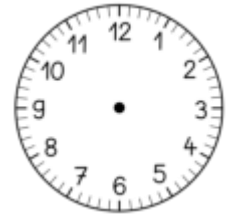
9 Uhr  
\_\_\_ Uhr



8 Uhr  
\_\_\_ Uhr

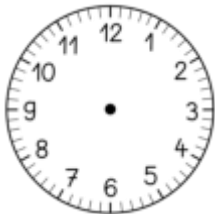


10 Uhr  
\_\_\_ Uhr

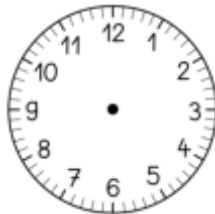


6 Uhr  
\_\_\_ Uhr

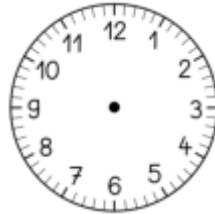
③



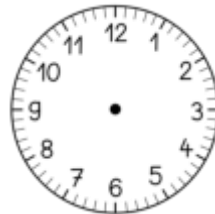
1 Uhr  
\_\_\_ Uhr



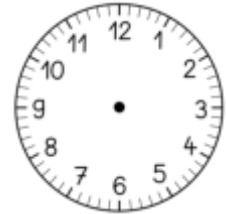
\_\_\_ Uhr  
15 Uhr



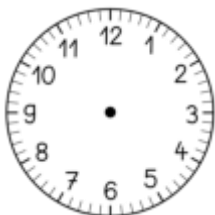
4 Uhr  
\_\_\_ Uhr



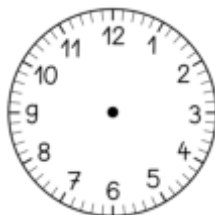
\_\_\_ Uhr  
21 Uhr



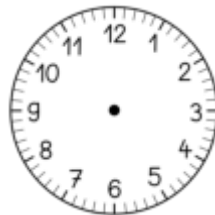
10 Uhr  
\_\_\_ Uhr



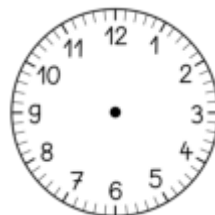
7 Uhr  
\_\_\_ Uhr



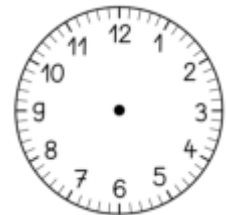
\_\_\_ Uhr  
23 Uhr



8 Uhr  
\_\_\_ Uhr



12 Uhr  
\_\_\_ Uhr



\_\_\_ Uhr  
20 Uhr



Name: \_\_\_\_\_



## Geldbeträge legen

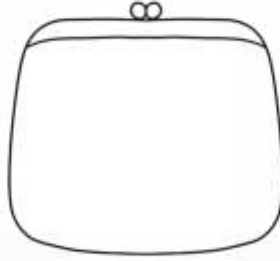
①



19 €



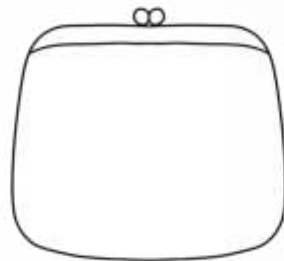
15 €



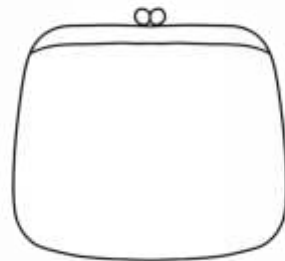
18 €



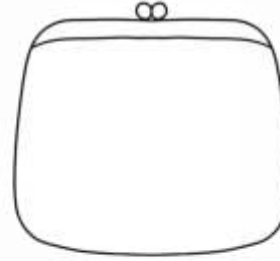
11 €




18 ct



15 ct




19 ct

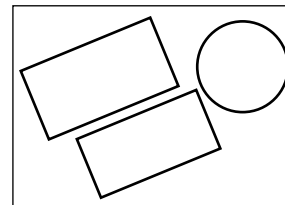


23 ct

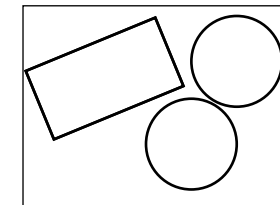
②



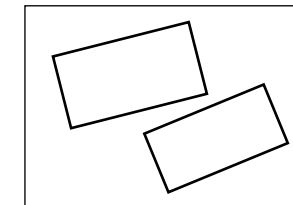
13 €



17 €



14 €



15 €

③



20 €



20 €




20 €




20 €


④




15 €



15 €



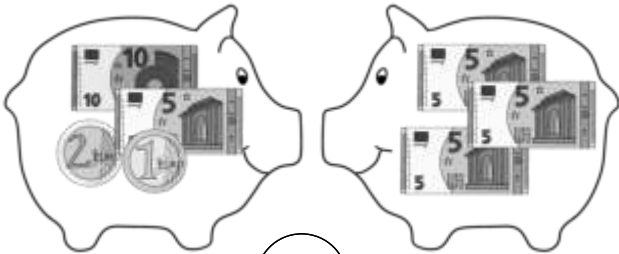
15 €



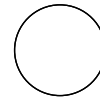
15 €



# Wer hat mehr?



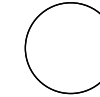
\_\_\_\_\_



\_\_\_\_\_



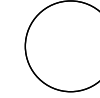
\_\_\_\_\_



\_\_\_\_\_



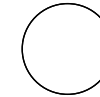
\_\_\_\_\_



\_\_\_\_\_



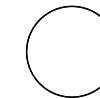
\_\_\_\_\_



\_\_\_\_\_



\_\_\_\_\_



\_\_\_\_\_

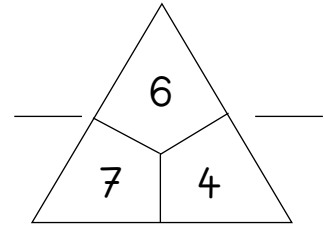
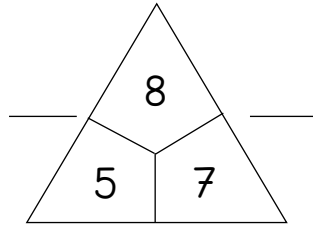
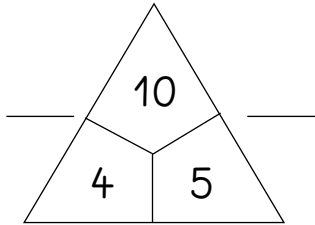






## Rechendreiecke

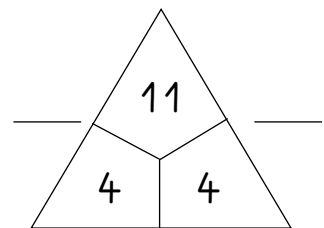
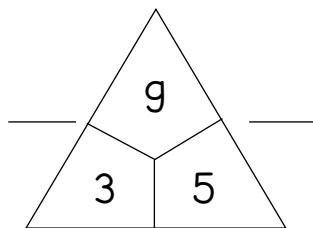
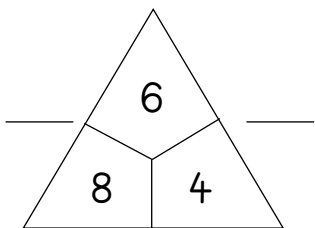
①



\_\_\_\_\_

\_\_\_\_\_

\_\_\_\_\_

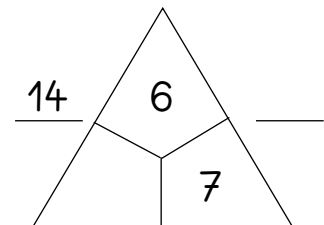
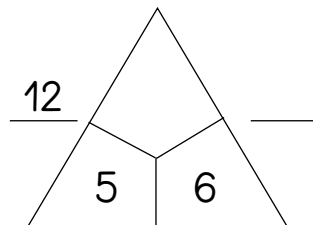
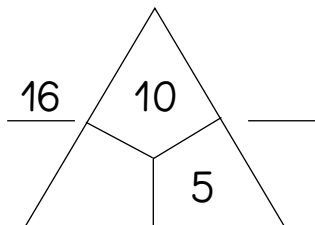


\_\_\_\_\_

\_\_\_\_\_

\_\_\_\_\_

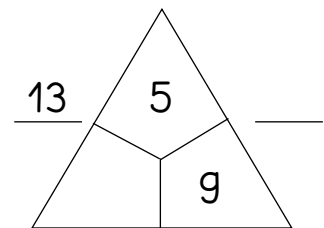
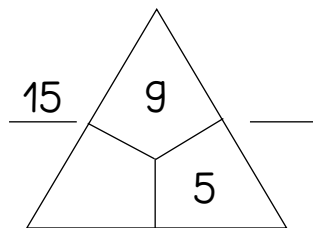
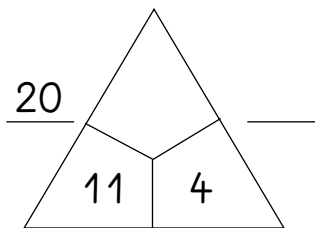
②



\_\_\_\_\_

\_\_\_\_\_

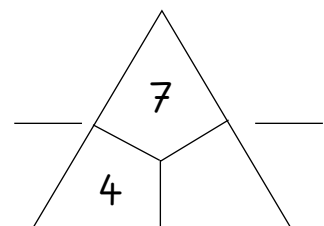
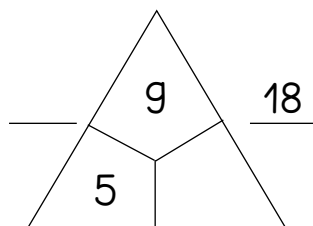
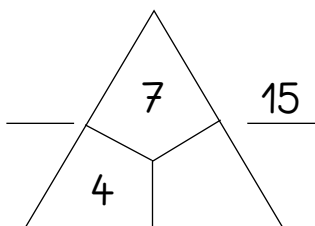
\_\_\_\_\_



\_\_\_\_\_

\_\_\_\_\_

\_\_\_\_\_



\_\_\_\_\_

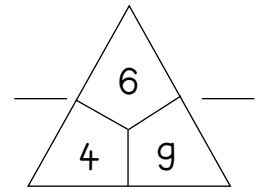
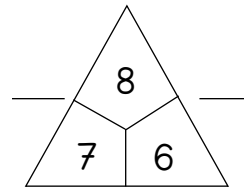
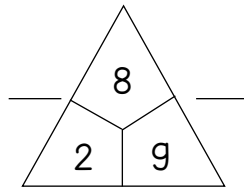
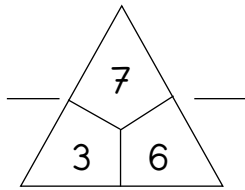
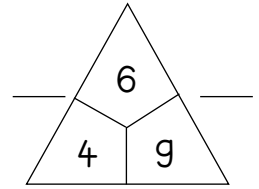
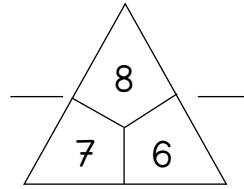
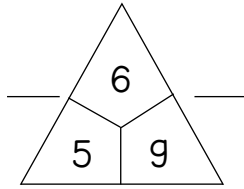
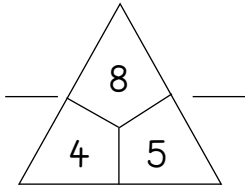
\_\_\_\_\_

\_\_\_\_\_

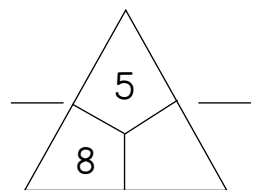
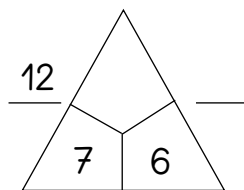
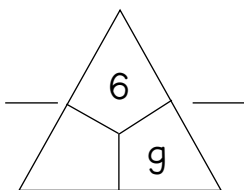
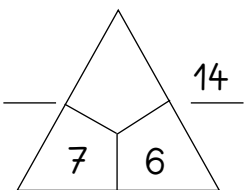
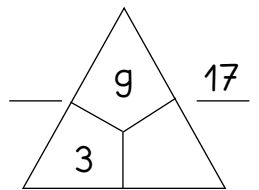
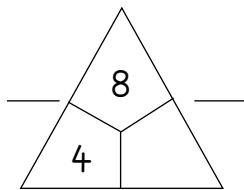
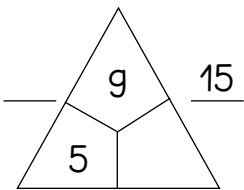
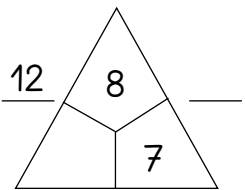


## Rechendreiecke 2

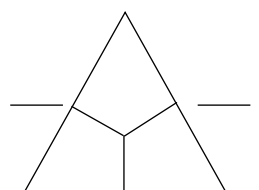
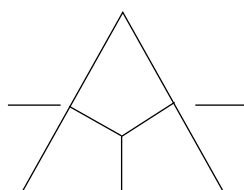
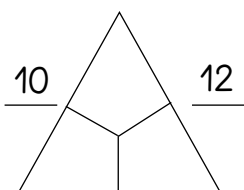
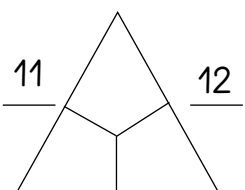
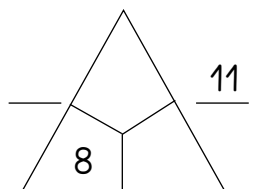
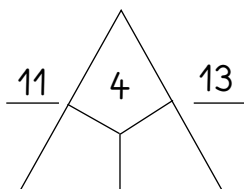
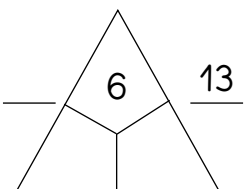
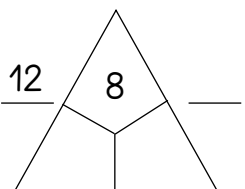
①



②



③



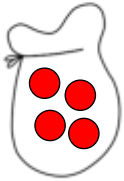


Name: \_\_\_\_\_

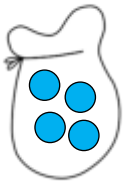


## Murmeln ziehen

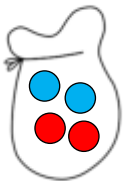
① Was stimmt? Kreuze an.



- Es ist **sicher**, dass ich eine rote Kugel ziehe.
- Es ist **möglich**, dass ich eine rote Kugel ziehe.
- Es ist **unmöglich**, dass ich eine rote Kugel ziehe.

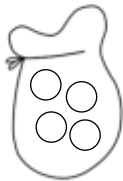


- Es ist **sicher**, dass ich eine rote Kugel ziehe.
- Es ist **möglich**, dass ich eine rote Kugel ziehe.
- Es ist **unmöglich**, dass ich eine rote Kugel ziehe.



- Es ist **sicher**, dass ich eine rote Kugel ziehe.
- Es ist **möglich**, dass ich eine rote Kugel ziehe.
- Es ist **unmöglich**, dass ich eine rote Kugel ziehe.

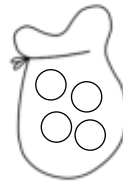
② Male die Kugeln richtig aus.



Es ist **sicher**, dass ich eine gelbe Kugel ziehe.



Es ist **unmöglich**, dass ich eine blaue Kugel ziehe.

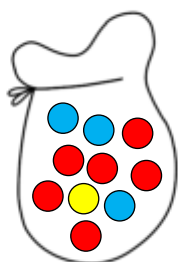


Es ist **möglich**, dass ich eine blaue Kugel ziehe.



Es ist **sicher**, dass ich eine grüne Kugel ziehe.

③ Richtig ✓ oder falsch x ?



Es ist **möglich**, dass ich eine rote Kugel ziehe.

✓ x

Es ist **möglich**, dass ich eine blaue Kugel ziehe.

Es ist **möglich**, dass ich eine grüne Kugel ziehe.

Es ist **sicher**, dass ich eine blaue Kugel ziehe.

Es ist **unmöglich**, dass ich eine grüne Kugel ziehe.

⚡ Es ist **wahrscheinlich**, dass ich eine gelbe Kugel ziehe.



Name: \_\_\_\_\_



## Wir zeichnen nach

