








Name: _____



Links und rechts

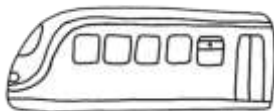
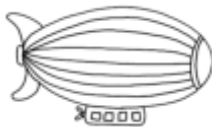





Name: _____



Links und rechts 2






Name: _____



Links oder rechts ?



links




rechts


						
<input type="text" value="l"/>	<input type="text"/>	<input type="text" value="r"/>	<input type="text"/>	<input type="text"/>	<input type="text"/>	<input type="text"/>
						
<input type="text"/>	<input type="text"/>	<input type="text"/>	<input type="text"/>	<input type="text"/>	<input type="text"/>	<input type="text"/>
						
<input type="text"/>	<input type="text"/>	<input type="text"/>	<input type="text"/>	<input type="text"/>	<input type="text"/>	<input type="text"/>

Vorgänger und Nachfolger

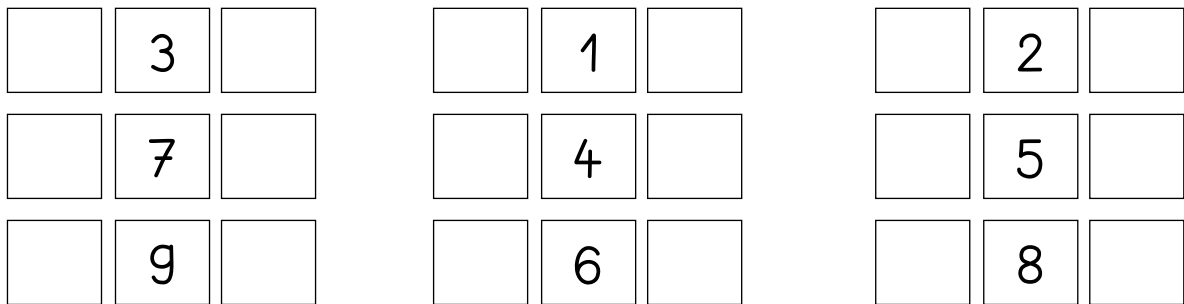
①



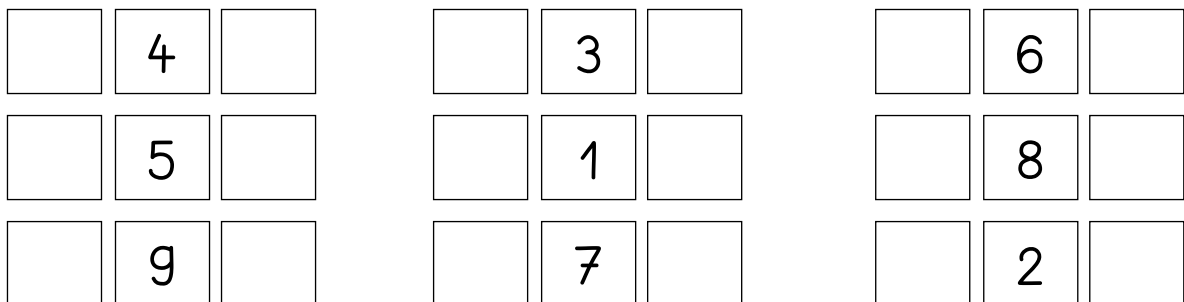
②



③




④




Vorgänger und Nachfolger 2

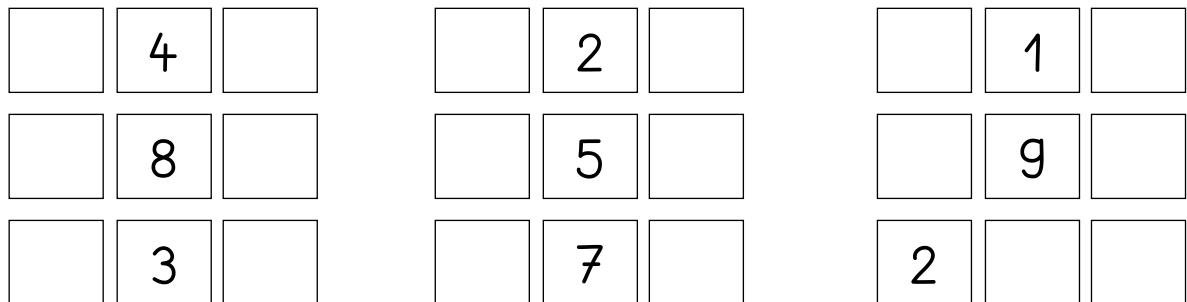
①



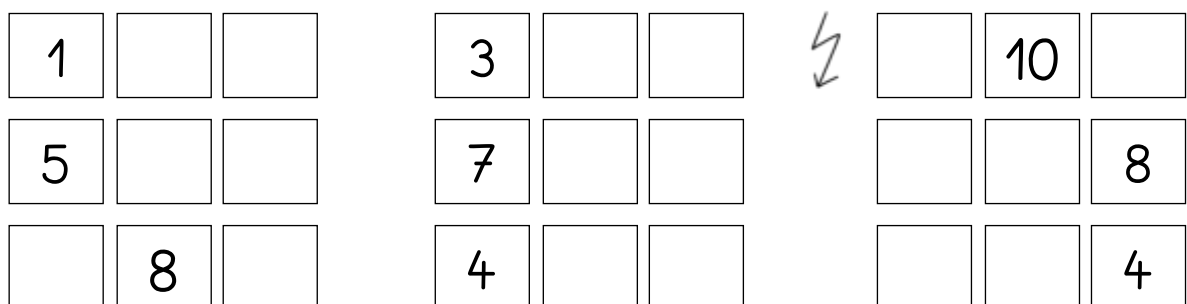
②



③



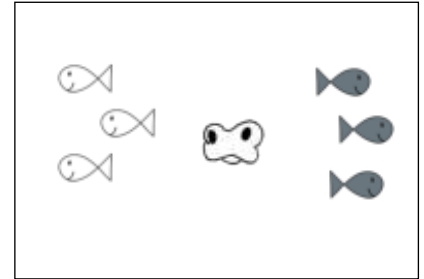
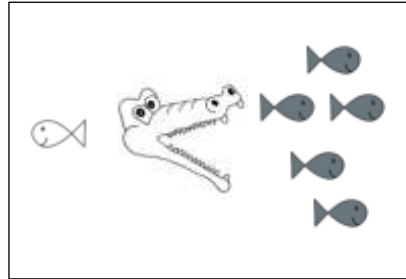
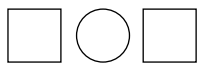
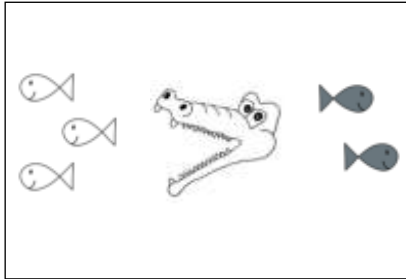
④



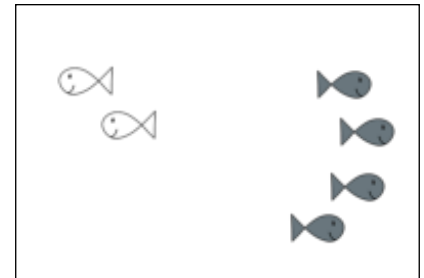
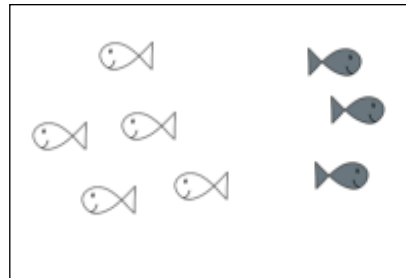
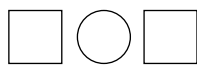



Größer und kleiner

①



②



③

$4 \bigcirc 9$

$4 \bigcirc 2$

$4 \bigcirc 4$

$9 \bigcirc 9$

$3 \bigcirc 10$

$2 \bigcirc 1$

$6 \bigcirc 9$

$7 \bigcirc 8$

$5 \bigcirc 1$

$7 \bigcirc 4$

$5 \bigcirc 7$

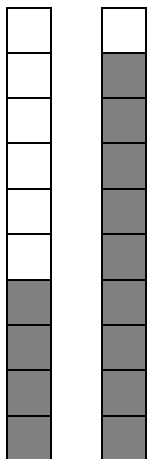
$1 \bigcirc 0$

$5 \bigcirc 3$

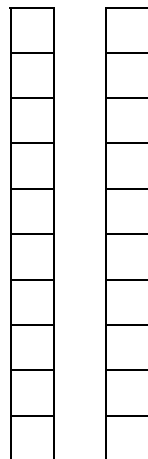
$9 \bigcirc 5$

$10 \bigcirc 5$

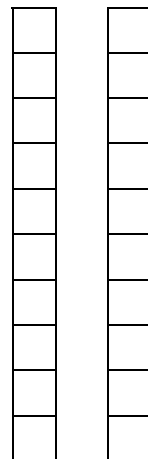
④



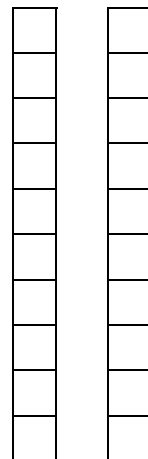
$4 \bigcirc 9$



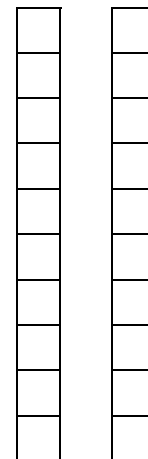
$6 \bigcirc 2$



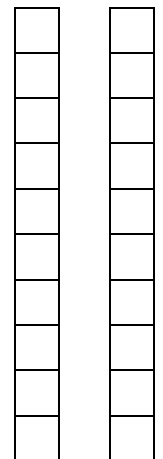
$3 \bigcirc 3$



$7 \bigcirc 6$



$5 \bigcirc 5$

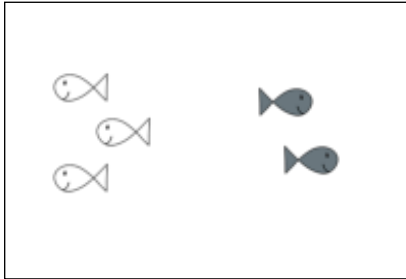


$1 \bigcirc 10$




Größer und kleiner 2


①



$3 \bigcirc 2$

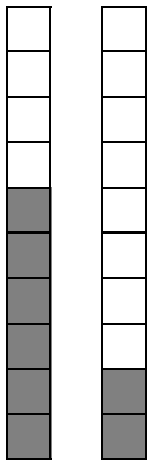


$5 \bigcirc 5$

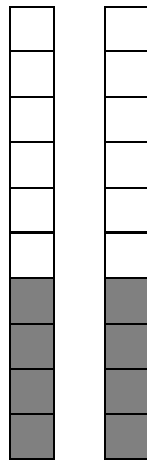


$7 \bigcirc 3$

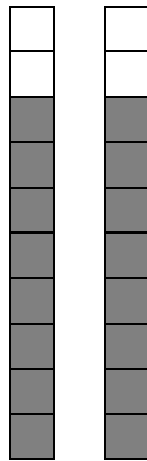
②



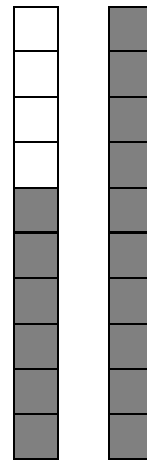
$\square \bigcirc \square$



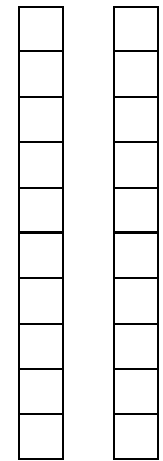
$\square \bigcirc \square$



$\square \bigcirc \square$



$\square \bigcirc \square$



$\square \bigcirc \square$

③

$5 \bigcirc 9$

$1 \bigcirc 2$

$4 \bigcirc 10$

$9 \bigcirc 9$

$3 \bigcirc 1$

$2 \bigcirc 8$

$8 \bigcirc 4$

$6 \bigcirc 3$

$5 \bigcirc 7$

$7 \bigcirc 4$

$4 \bigcirc 7$

$3 \bigcirc 0$

$1 \bigcirc 3$

$9 \bigcirc 2$

$10 \bigcirc 8$

④

$4 < \square$

$4 > \square$

$4 = \square$

$7 > \square$

$\square < 3$

$4 < \square$

$4 > \square$

$9 = \square$

$4 > \square$

$\square > 9$

$4 < \square$

$4 > \square$

$3 = \square$

$1 > \square$

$\square < 10$

Größer und kleiner 3

①

$5 \bigcirc 7$

$5 \bigcirc 2$

$4 \bigcirc 1$

$4 \bigcirc 9$

$2 \bigcirc 1$

$3 \bigcirc 8$

$8 \bigcirc 2$

$2 \bigcirc 3$

$5 \bigcirc 8$

$7 \bigcirc 5$

$4 \bigcirc 6$

$9 \bigcirc 0$

$1 \bigcirc 8$

$3 \bigcirc 2$

$10 \bigcirc 8$

②

$6 \bigcirc 9$

$0 \bigcirc 0$

$4 \bigcirc 2$

$6 \bigcirc 9$

$5 \bigcirc 1$

$2 \bigcirc 9$

$2 \bigcirc 4$

$0 \bigcirc 3$

$5 \bigcirc 3$

$7 \bigcirc 7$

$1 \bigcirc 7$

$3 \bigcirc 8$

$7 \bigcirc 3$

$1 \bigcirc 2$

$0 \bigcirc 8$

③

$7 < \square$

$7 > \square$

$6 < \square$

$4 > \square$

$\square < 8$

$7 < \square$

$7 > \square$

$2 < \square$

$2 > \square$

$\square > 2$

$7 < \square$

$7 > \square$

$7 < \square$

$9 > \square$

$\square < 9$

④

$5 <$

0	1	2	3	4	5	6	7	8	9	10
--------------	--------------	---	---	---	---	---	---	---	---	----

$8 <$

0	1	2	3	4	5	6	7	8	9	10
---	---	---	---	---	---	---	---	---	---	----

$7 >$

0	1	2	3	4	5	6	7	8	9	10
---	---	---	---	---	---	---	---	---	---	----

$4 >$

0	1	2	3	4	5	6	7	8	9	10
---	---	---	---	---	---	---	---	---	---	----

$6 <$

0	1	2	3	4	5	6	7	8	9	10
---	---	---	---	---	---	---	---	---	---	----

$5 =$

0	1	2	3	4	5	6	7	8	9	10
---	---	---	---	---	---	---	---	---	---	----



Zerlegehäuser

○○○○

○○○○

○○○○

○○○○

3

+

+

+

+

○○○○○○

○○○○○○

○○○○○○

○○○○○○

○○○○○○

○○○○○○

4

+

+

+

+

+

○○○○○○○○

○○○○○○○○

○○○○○○○○

○○○○○○○○

○○○○○○○○

○○○○○○○○

○○○○○○○○

6

+

+

+

+

+

+

○○○○○○○○

○○○○○○○○

○○○○○○○○

○○○○○○○○

○○○○○○○○

○○○○○○○○

○○○○○○○○

5

+

+

+

+

+

+

○○○○○○○○○○

○○○○○○○○○○

○○○○○○○○○○

○○○○○○○○○○

○○○○○○○○○○

○○○○○○○○○○

○○○○○○○○○○

○○○○○○○○○○

○○○○○○○○○○

7

+

+

+

+

+


+

+




Tauschaufgaben

①



$$\square + \square = \square$$

T: $\square + \square = \square$



$$\square + \square = \square$$

T: $\square + \square = \square$

②



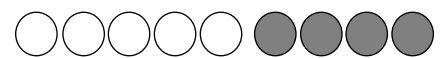
$$\square + \square = \square$$

T: $\square + \square = \square$



$$\square + \square = \square$$

T: $\square + \square = \square$



$$\square + \square = \square$$

T: $\square + \square = \square$



③

$$5 + 2 = \square$$

T: $\square + \square = \square$

$$8 + 1 = \square$$

T: $\square + \square = \square$

$$2 + 6 = \square$$

T: $\square + \square = \square$

$$4 + 3 = \square$$

T: $\square + \square = \square$

$$5 + 3 = \square$$

T: $\square + \square = \square$

$$7 + 3 = \square$$

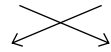
T: $\square + \square = \square$



Tauschaufgaben 2

①

$$7 + 2 = \square$$



$$\text{T: } \square + \square = \square$$

$$5 + 1 = \square$$



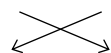
$$\text{T: } \square + \square = \square$$

$$3 + 6 = \square$$



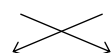
$$\text{T: } \square + \square = \square$$

$$4 + 2 = \square$$



$$\text{T: } \square + \square = \square$$

$$4 + 3 = \square$$



$$\text{T: } \square + \square = \square$$

$$4 + 6 = \square$$



$$\text{T: } \square + \square = \square$$

②

$$3 + 2 = \square$$

$$\text{T: } \square + \square = \square$$

$$6 + 1 = \square$$

$$\text{T: } \square + \square = \square$$

$$2 + 6 = \square$$

$$\text{T: } \square + \square = \square$$

$$5 + 4 = \square$$

$$\text{T: } \square + \square = \square$$

$$7 + 2 = \square$$

$$\text{T: } \square + \square = \square$$

$$4 + 1 = \square$$

$$\text{T: } \square + \square = \square$$

$$3 + 3 = \square$$

$$\text{T: } \square + \square = \square$$

$$5 + 3 = \square$$

$$\text{T: } \square + \square = \square$$

$$7 + 3 = \square$$

$$\text{T: } \square + \square = \square$$

$$5 + 2 = \square$$

$$\text{T: } \square + \square = \square$$

$$4 + 4 = \square$$

$$\text{T: } \square + \square = \square$$

$$8 + 2 = \square$$

$$\text{T: } \square + \square = \square$$

$$5 + 3 = \square$$

$$\text{T: } \square + \square = \square$$

$$2 + 3 = \square$$

$$\text{T: } \square + \square = \square$$

$$6 + 2 = \square$$

$$\text{T: } \square + \square = \square$$

$$1 + 2 = \square$$

$$\text{T: } \square + \square = \square$$

$$7 + 2 = \square$$

$$\text{T: } \square + \square = \square$$

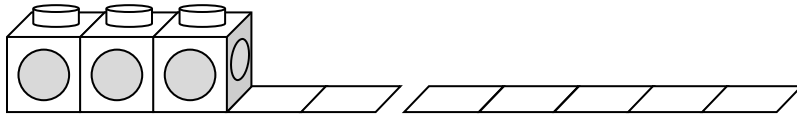
$$5 + 4 = \square$$

$$\text{T: } \square + \square = \square$$



Ergänzen

①

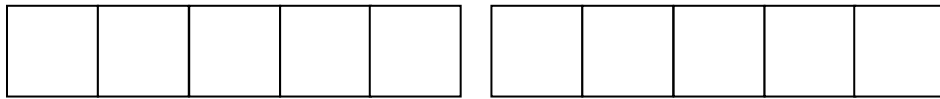


$3 + \square = 6$

$3 + \square = 7$

$3 + \square = 8$

$3 + \square = 9$



②

$4 + \square = 6$

$5 + \square = 6$

$6 + \square = 6$

$2 + \square = 6$

$4 + \square = 7$

$5 + \square = 7$

$6 + \square = 7$

$2 + \square = 7$

$4 + \square = 8$

$5 + \square = 8$

$6 + \square = 8$

$2 + \square = 8$

$4 + \square = 9$

$5 + \square = 9$

$6 + \square = 9$

$2 + \square = 9$

③

$1 + \square = 6$

$2 + \square = 7$

$4 + \square = 8$

$4 + \square = 9$

$2 + \square = 6$

$3 + \square = 7$

$5 + \square = 8$

$3 + \square = 9$

$3 + \square = 6$

$4 + \square = 7$

$6 + \square = 8$

$6 + \square = 9$

$4 + \square = 6$

$5 + \square = 7$

$7 + \square = 8$

$2 + \square = 9$

④

$4 + \square = 8$

$7 + \square = 10$

$4 + \square = 6$

$6 + \square = 10$

$2 + \square = 6$

$3 + \square = 6$

$5 + \square = 8$

$7 + \square = 10$

$5 + \square = 10$

$6 + \square = 8$

$6 + \square = 9$

$2 + \square = 10$

$3 + \square = 7$

$5 + \square = 9$

$3 + \square = 4$

$5 + \square = 10$



Lückenaufgaben

①

$4 + \square = 6$	$5 + \square = 6$	$6 + \square = 6$	$2 + \square = 6$
$4 + \square = 7$	$5 + \square = 7$	$6 + \square = 7$	$2 + \square = 7$
$4 + \square = 8$	$5 + \square = 8$	$6 + \square = 8$	$2 + \square = 8$
$4 + \square = 9$	$5 + \square = 9$	$6 + \square = 9$	$2 + \square = 9$

②

$\square + 3 = 6$	$\square + 1 = 5$	$\square + 5 = 8$	$\square + 3 = 10$
$\square + 5 = 6$	$\square + 4 = 8$	$\square + 8 = 10$	$\square + 5 = 5$
$\square + 2 = 6$	$\square + 7 = 9$	$\square + 2 = 6$	$\square + 2 = 7$
$\square + 1 = 6$	$\square + 3 = 4$	$\square + 3 = 7$	$\square + 9 = 10$

③

$4 + \square = 10$	$3 + \square = 9$	$1 + \square = 8$
$\square + 7 = 10$	$\square + 5 = 9$	$\square + 3 = 8$
$2 + \square = 10$	$6 + \square = 9$	$2 + \square = 8$
$\square + 5 = 10$	$\square + 7 = 9$	$\square + 1 = 8$





④


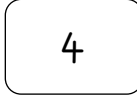


$4 + \square = 6$	$1 + \square = 5$	$2 + \square = 7$
$3 + 5 = \square$	$5 + 5 = \square$	$1 + 3 = \square$
$6 + \square = 7$	$3 + \square = 8$	$6 + \square = 8$
$\square + 7 = 9$	$\square + 4 = 9$	$\square + 2 = 4$
$2 + 2 = \square$	$4 + 3 = \square$	$4 + 4 = \square$
$\square + 4 = 5$	$\square + 2 = 5$	$\square + 7 = 8$







Rechenmauern




①







 $5 + 2 =$ 


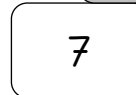
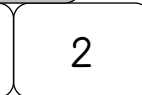



 $4 + 3 =$ 







 $2 + 6 =$ 




②















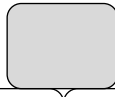
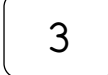





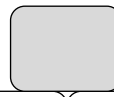






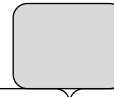
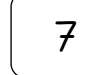








③

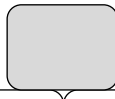






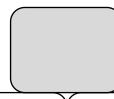
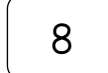





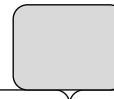















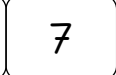












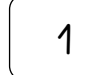
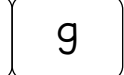






Rechenmauern 2

①

<div style="border: 1px solid black; width: 40px; height: 20px; margin: 0 auto 10px auto;"></div> <div style="display: flex; justify-content: space-around; width: 100%;"> <div style="border: 1px solid black; width: 30px; height: 20px; text-align: center; margin: 0 5px;">3</div> <div style="border: 1px solid black; width: 30px; height: 20px; text-align: center; margin: 0 5px;">2</div> </div>	<div style="border: 1px solid black; width: 40px; height: 20px; margin: 0 auto 10px auto;"></div> <div style="display: flex; justify-content: space-around; width: 100%;"> <div style="border: 1px solid black; width: 30px; height: 20px; text-align: center; margin: 0 5px;">3</div> <div style="border: 1px solid black; width: 30px; height: 20px; text-align: center; margin: 0 5px;">5</div> </div>	<div style="border: 1px solid black; width: 40px; height: 20px; margin: 0 auto 10px auto;"></div> <div style="display: flex; justify-content: space-around; width: 100%;"> <div style="border: 1px solid black; width: 30px; height: 20px; text-align: center; margin: 0 5px;">1</div> <div style="border: 1px solid black; width: 30px; height: 20px; text-align: center; margin: 0 5px;">2</div> </div>	<div style="border: 1px solid black; width: 40px; height: 20px; margin: 0 auto 10px auto;"></div> <div style="display: flex; justify-content: space-around; width: 100%;"> <div style="border: 1px solid black; width: 30px; height: 20px; text-align: center; margin: 0 5px;">8</div> <div style="border: 1px solid black; width: 30px; height: 20px; text-align: center; margin: 0 5px;">1</div> </div>
<div style="border: 1px solid black; width: 40px; height: 20px; margin: 0 auto 10px auto;"></div> <div style="display: flex; justify-content: space-around; width: 100%;"> <div style="border: 1px solid black; width: 30px; height: 20px; text-align: center; margin: 0 5px;">3</div> <div style="border: 1px solid black; width: 30px; height: 20px; text-align: center; margin: 0 5px;">3</div> </div>	<div style="border: 1px solid black; width: 40px; height: 20px; margin: 0 auto 10px auto;"></div> <div style="display: flex; justify-content: space-around; width: 100%;"> <div style="border: 1px solid black; width: 30px; height: 20px; text-align: center; margin: 0 5px;">5</div> <div style="border: 1px solid black; width: 30px; height: 20px; text-align: center; margin: 0 5px;">4</div> </div>	<div style="border: 1px solid black; width: 40px; height: 20px; margin: 0 auto 10px auto;"></div> <div style="display: flex; justify-content: space-around; width: 100%;"> <div style="border: 1px solid black; width: 30px; height: 20px; text-align: center; margin: 0 5px;">7</div> <div style="border: 1px solid black; width: 30px; height: 20px; text-align: center; margin: 0 5px;">2</div> </div>	<div style="border: 1px solid black; width: 40px; height: 20px; margin: 0 auto 10px auto;"></div> <div style="display: flex; justify-content: space-around; width: 100%;"> <div style="border: 1px solid black; width: 30px; height: 20px; text-align: center; margin: 0 5px;">4</div> <div style="border: 1px solid black; width: 30px; height: 20px; text-align: center; margin: 0 5px;">3</div> </div>
<div style="border: 1px solid black; width: 40px; height: 20px; margin: 0 auto 10px auto;"></div> <div style="display: flex; justify-content: space-around; width: 100%;"> <div style="border: 1px solid black; width: 30px; height: 20px; text-align: center; margin: 0 5px;">5</div> <div style="border: 1px solid black; width: 30px; height: 20px; text-align: center; margin: 0 5px;">2</div> </div>	<div style="border: 1px solid black; width: 40px; height: 20px; margin: 0 auto 10px auto;"></div> <div style="display: flex; justify-content: space-around; width: 100%;"> <div style="border: 1px solid black; width: 30px; height: 20px; text-align: center; margin: 0 5px;">1</div> <div style="border: 1px solid black; width: 30px; height: 20px; text-align: center; margin: 0 5px;">7</div> </div>	<div style="border: 1px solid black; width: 40px; height: 20px; margin: 0 auto 10px auto;"></div> <div style="display: flex; justify-content: space-around; width: 100%;"> <div style="border: 1px solid black; width: 30px; height: 20px; text-align: center; margin: 0 5px;">4</div> <div style="border: 1px solid black; width: 30px; height: 20px; text-align: center; margin: 0 5px;">5</div> </div>	<div style="border: 1px solid black; width: 40px; height: 20px; margin: 0 auto 10px auto;"></div> <div style="display: flex; justify-content: space-around; width: 100%;"> <div style="border: 1px solid black; width: 30px; height: 20px; text-align: center; margin: 0 5px;">1</div> <div style="border: 1px solid black; width: 30px; height: 20px; text-align: center; margin: 0 5px;">8</div> </div>
<div style="border: 1px solid black; width: 40px; height: 20px; margin: 0 auto 10px auto;"></div> <div style="display: flex; justify-content: space-around; width: 100%;"> <div style="border: 1px solid black; width: 30px; height: 20px; text-align: center; margin: 0 5px;">6</div> <div style="border: 1px solid black; width: 30px; height: 20px; text-align: center; margin: 0 5px;">3</div> </div>	<div style="border: 1px solid black; width: 40px; height: 20px; margin: 0 auto 10px auto;"></div> <div style="display: flex; justify-content: space-around; width: 100%;"> <div style="border: 1px solid black; width: 30px; height: 20px; text-align: center; margin: 0 5px;">2</div> <div style="border: 1px solid black; width: 30px; height: 20px; text-align: center; margin: 0 5px;">6</div> </div>	<div style="border: 1px solid black; width: 40px; height: 20px; margin: 0 auto 10px auto;"></div> <div style="display: flex; justify-content: space-around; width: 100%;"> <div style="border: 1px solid black; width: 30px; height: 20px; text-align: center; margin: 0 5px;">4</div> <div style="border: 1px solid black; width: 30px; height: 20px; text-align: center; margin: 0 5px;">4</div> </div>	<div style="margin-bottom: 5px;">⚡</div> <div style="border: 1px solid black; width: 40px; height: 20px; margin: 0 auto 10px auto;"></div> <div style="display: flex; justify-content: space-around; width: 100%;"> <div style="border: 1px solid black; width: 30px; height: 20px; text-align: center; margin: 0 5px;">9</div> <div style="border: 1px solid black; width: 30px; height: 20px; text-align: center; margin: 0 5px;">0</div> </div>

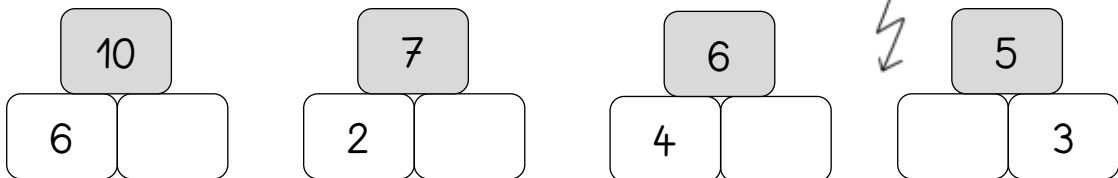
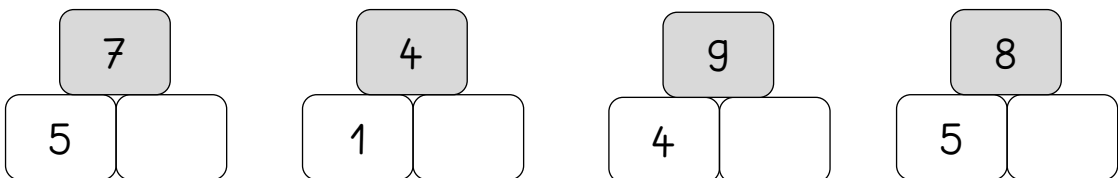
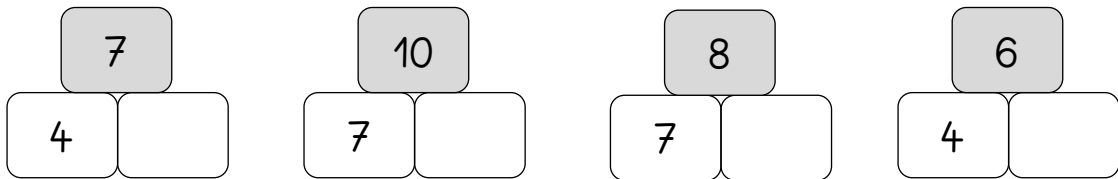
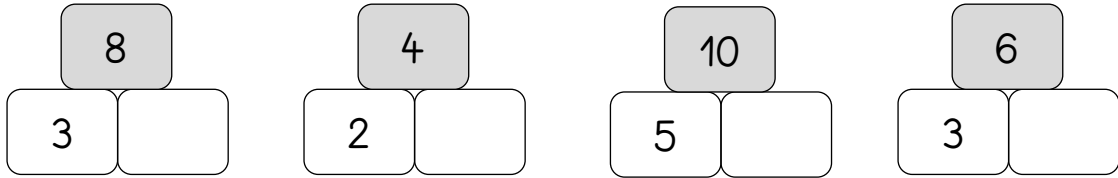
②

<div style="border: 1px solid black; width: 40px; height: 20px; margin: 0 auto 10px auto;"></div> <div style="display: flex; justify-content: space-around; width: 100%;"> <div style="border: 1px solid black; width: 30px; height: 20px; margin: 0 5px;"></div> <div style="border: 1px solid black; width: 30px; height: 20px; margin: 0 5px;"></div> </div> <div style="display: flex; justify-content: space-around; width: 100%;"> <div style="border: 1px solid black; width: 30px; height: 20px; text-align: center; margin: 0 5px;">2</div> <div style="border: 1px solid black; width: 30px; height: 20px; text-align: center; margin: 0 5px;">1</div> <div style="border: 1px solid black; width: 30px; height: 20px; text-align: center; margin: 0 5px;">5</div> </div>	<div style="border: 1px solid black; width: 40px; height: 20px; margin: 0 auto 10px auto;"></div> <div style="display: flex; justify-content: space-around; width: 100%;"> <div style="border: 1px solid black; width: 30px; height: 20px; margin: 0 5px;"></div> <div style="border: 1px solid black; width: 30px; height: 20px; margin: 0 5px;"></div> </div> <div style="display: flex; justify-content: space-around; width: 100%;"> <div style="border: 1px solid black; width: 30px; height: 20px; text-align: center; margin: 0 5px;">3</div> <div style="border: 1px solid black; width: 30px; height: 20px; text-align: center; margin: 0 5px;">2</div> <div style="border: 1px solid black; width: 30px; height: 20px; text-align: center; margin: 0 5px;">1</div> </div>	<div style="border: 1px solid black; width: 40px; height: 20px; margin: 0 auto 10px auto;"></div> <div style="display: flex; justify-content: space-around; width: 100%;"> <div style="border: 1px solid black; width: 30px; height: 20px; margin: 0 5px;"></div> <div style="border: 1px solid black; width: 30px; height: 20px; margin: 0 5px;"></div> </div> <div style="display: flex; justify-content: space-around; width: 100%;"> <div style="border: 1px solid black; width: 30px; height: 20px; text-align: center; margin: 0 5px;">4</div> <div style="border: 1px solid black; width: 30px; height: 20px; text-align: center; margin: 0 5px;">1</div> <div style="border: 1px solid black; width: 30px; height: 20px; text-align: center; margin: 0 5px;">1</div> </div>
<div style="border: 1px solid black; width: 40px; height: 20px; margin: 0 auto 10px auto;"></div> <div style="display: flex; justify-content: space-around; width: 100%;"> <div style="border: 1px solid black; width: 30px; height: 20px; margin: 0 5px;"></div> <div style="border: 1px solid black; width: 30px; height: 20px; margin: 0 5px;"></div> </div> <div style="display: flex; justify-content: space-around; width: 100%;"> <div style="border: 1px solid black; width: 30px; height: 20px; text-align: center; margin: 0 5px;">1</div> <div style="border: 1px solid black; width: 30px; height: 20px; text-align: center; margin: 0 5px;">4</div> <div style="border: 1px solid black; width: 30px; height: 20px; text-align: center; margin: 0 5px;">1</div> </div>	<div style="border: 1px solid black; width: 40px; height: 20px; margin: 0 auto 10px auto;"></div> <div style="display: flex; justify-content: space-around; width: 100%;"> <div style="border: 1px solid black; width: 30px; height: 20px; margin: 0 5px;"></div> <div style="border: 1px solid black; width: 30px; height: 20px; margin: 0 5px;"></div> </div> <div style="display: flex; justify-content: space-around; width: 100%;"> <div style="border: 1px solid black; width: 30px; height: 20px; text-align: center; margin: 0 5px;">2</div> <div style="border: 1px solid black; width: 30px; height: 20px; text-align: center; margin: 0 5px;">1</div> <div style="border: 1px solid black; width: 30px; height: 20px; text-align: center; margin: 0 5px;">3</div> </div>	<div style="border: 1px solid black; width: 40px; height: 20px; margin: 0 auto 10px auto;"></div> <div style="display: flex; justify-content: space-around; width: 100%;"> <div style="border: 1px solid black; width: 30px; height: 20px; margin: 0 5px;"></div> <div style="border: 1px solid black; width: 30px; height: 20px; margin: 0 5px;"></div> </div> <div style="display: flex; justify-content: space-around; width: 100%;"> <div style="border: 1px solid black; width: 30px; height: 20px; text-align: center; margin: 0 5px;">2</div> <div style="border: 1px solid black; width: 30px; height: 20px; text-align: center; margin: 0 5px;">2</div> <div style="border: 1px solid black; width: 30px; height: 20px; text-align: center; margin: 0 5px;">2</div> </div>

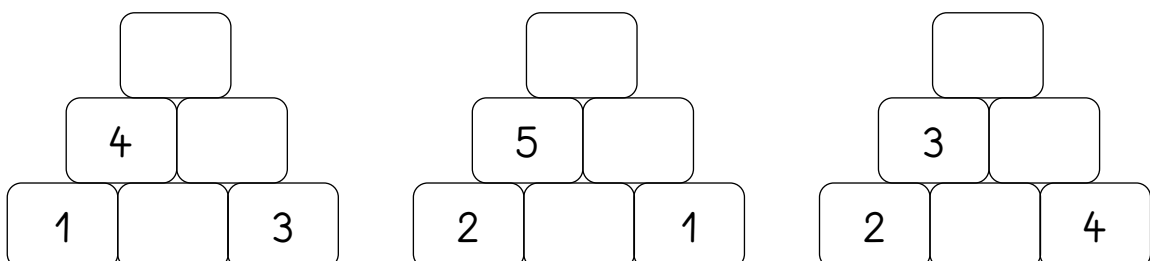
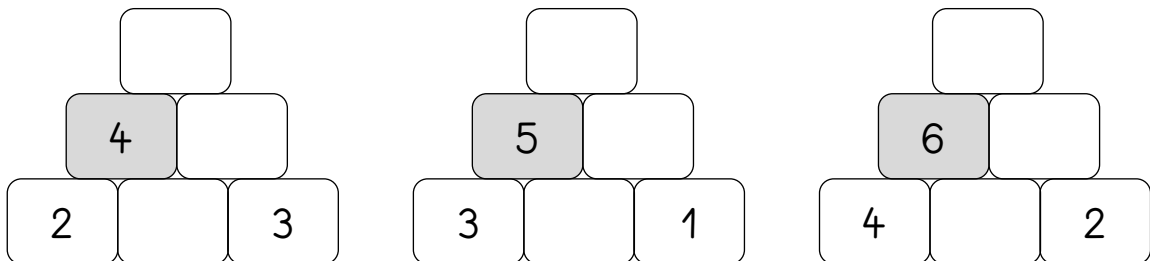


Rechenmauern 3

①



②









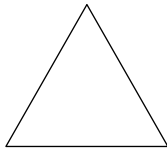



Name: _____



Flächenformen

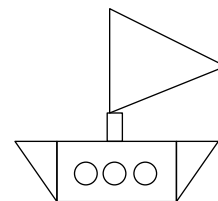
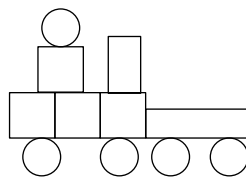

①






②

Ecken				
Seiten				

③





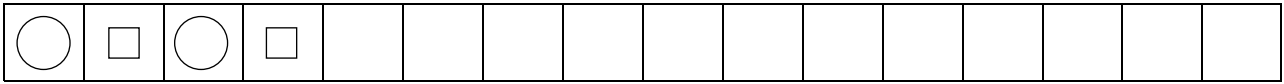


Name: _____



Wir zeichnen Muster

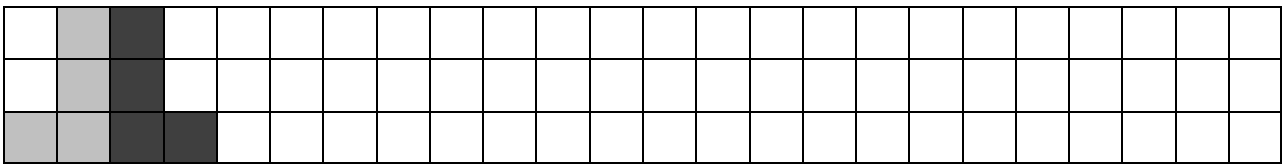
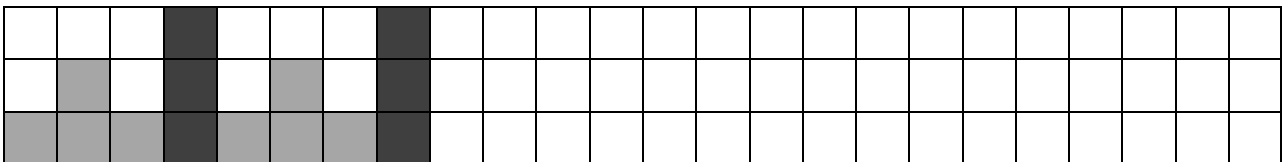
①



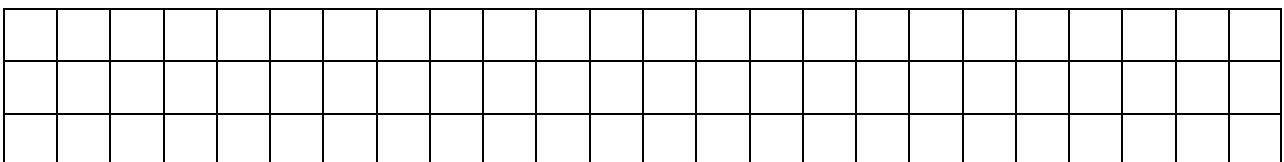
?!



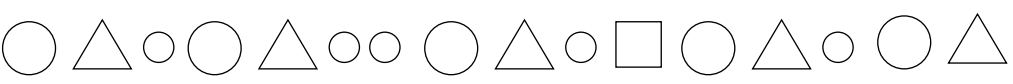
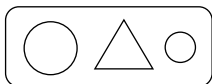
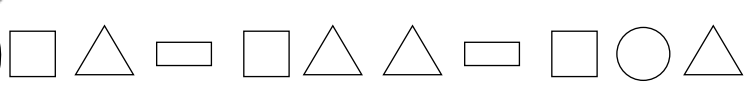
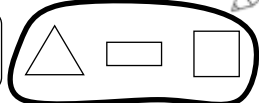
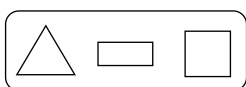
②



?!



③





Name: _____



Wir wiederholen

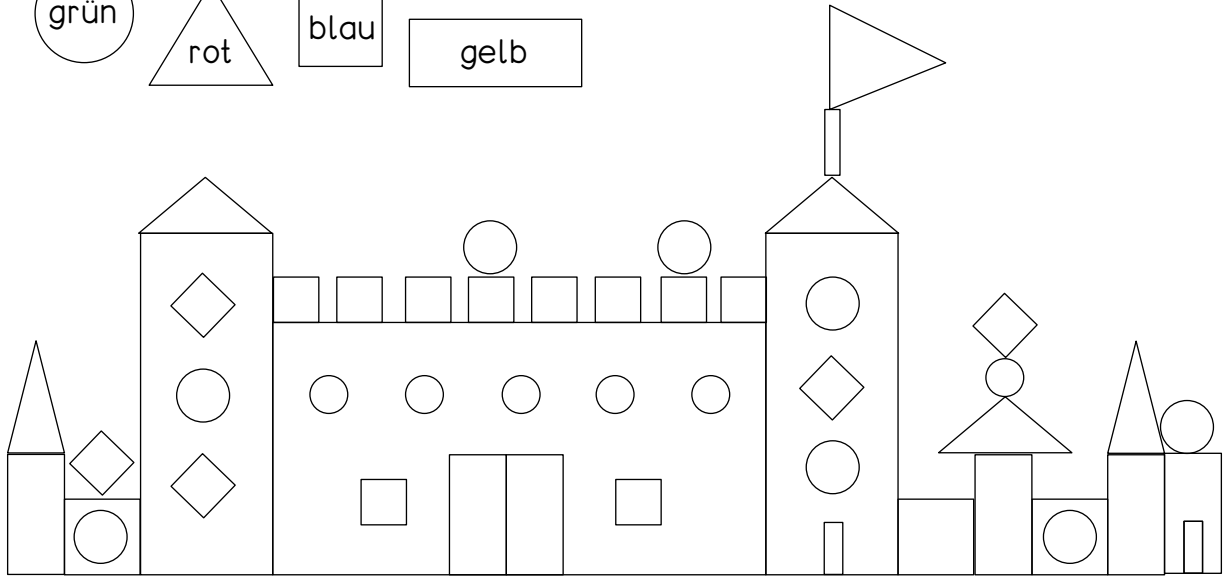
grün

rot

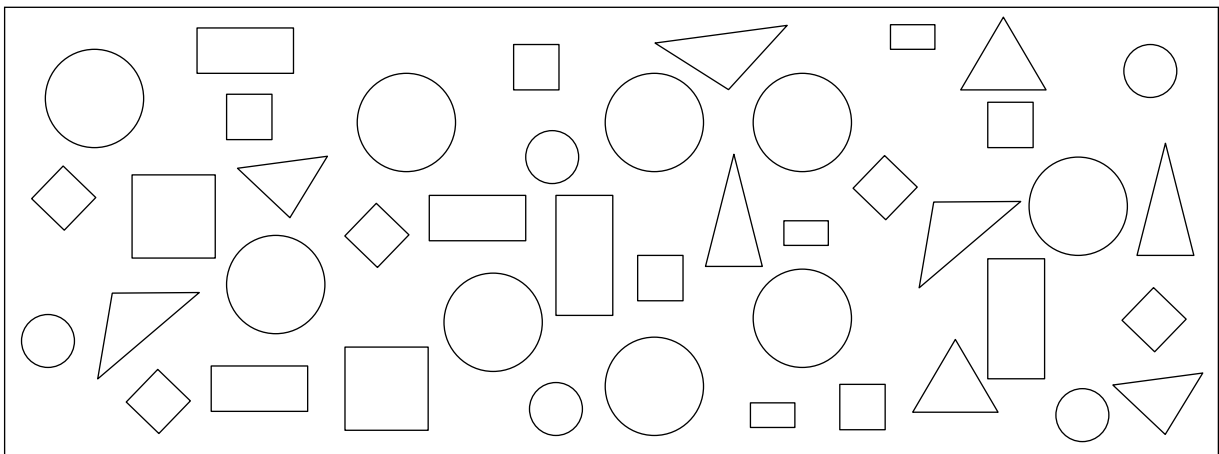
blau

gelb

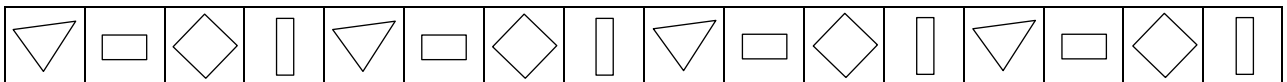
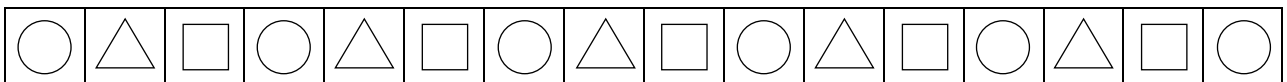
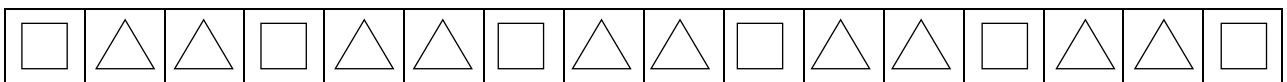
①



②



③







Name: _____



Was soll Leni anziehen?



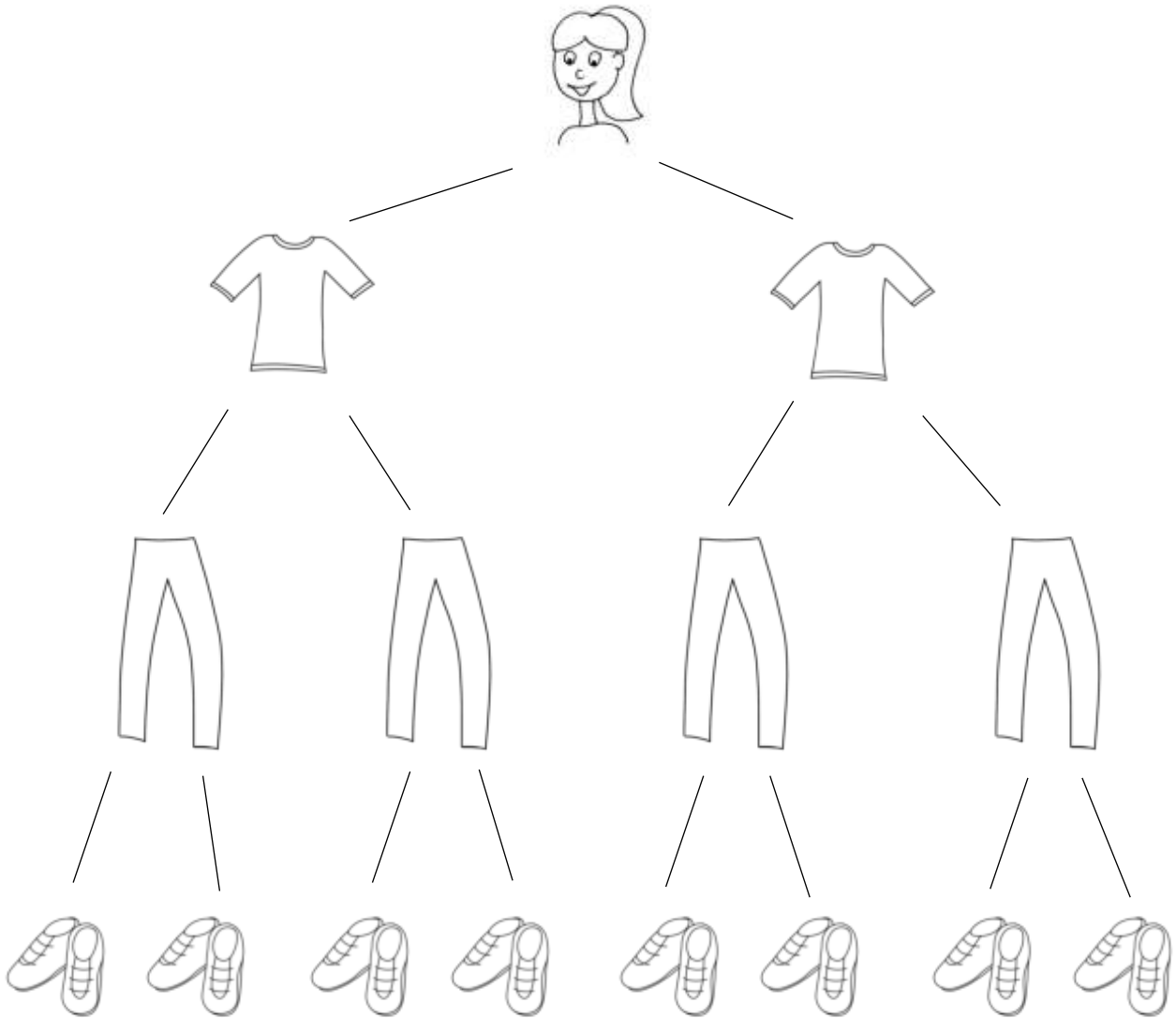
Ich habe _____ Möglichkeiten gefunden.



Name: _____



Was soll Leni anziehen?



Es gibt _____ Möglichkeiten.



Name: _____



Der Euro



①

€	€	€								
---	---	---	--	--	--	--	--	--	--	--

②

<input type="text" value="€"/>	<input type="text"/>	<input type="text"/>	<input type="text"/>

③

<input type="text"/>	<input type="text"/>	<input type="text"/>	<input type="text"/>

④

4 €	5 €	7 €	10 €
<input type="text"/>	<input type="text"/>	<input type="text"/>	<input type="text"/>
3 €	6 €	8 €	10 €



Name: _____







Der Cent



①

ct	ct	ct								
----	----	----	--	--	--	--	--	--	--	--

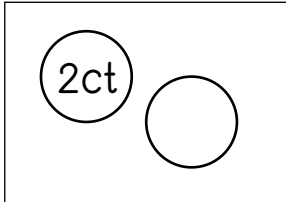
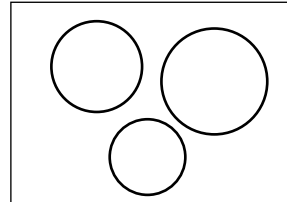






②

			
<input type="text" value="ct"/>	<input type="text"/>	<input type="text"/>	<input type="text"/>

③

			
<input type="text"/>	<input type="text"/>	<input type="text"/>	<input type="text"/>

④

			
4 ct	8 ct	9 ct	7 ct
			
6 ct	2 ct	10 ct	11 ct



Name: _____



Geldbeträge legen

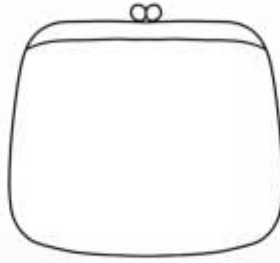
①



9 €




6 €




8 €



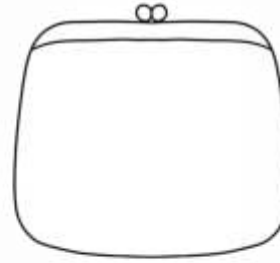
10 €




8 ct



5 ct



9 ct



14 ct

②



5 €



5 €



5 €




5 €

③




10 €



10 €

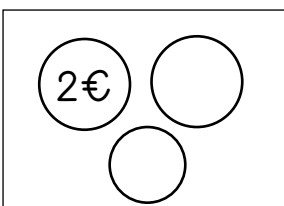


10 €

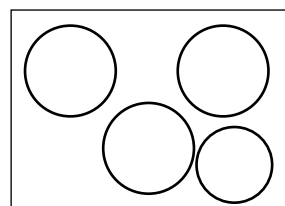


10 €

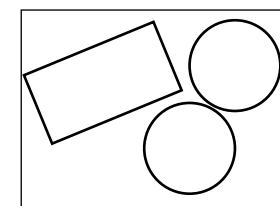
④



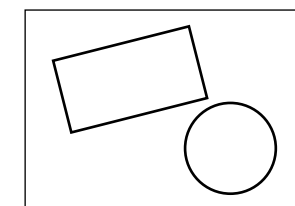
5 €



7 €



9 €



7 €



Wer hat mehr?

_____ ○ _____

_____ ○ _____

_____ ○ _____

_____ ○ _____

_____ ○ _____

_____ ○ _____

_____ ○ _____

_____ ○ _____

_____ ○ _____

_____ ○ _____



Wiederholung

①

$$2 + \square = 6$$

$$3 + 4 = \square$$

$$1 + \square = 7$$

$$\square + 2 = 9$$

$$2 + 5 = \square$$

$$\square + 6 = 8$$

$$2 + \square = 5$$

$$5 + 4 = \square$$

$$6 + \square = 8$$

$$\square + 5 = 9$$

$$4 + 1 = \square$$

$$\square + 3 = 5$$

$$4 + \square = 7$$

$$6 + 3 = \square$$

$$3 + \square = 8$$

$$\square + 2 = 4$$

$$5 + 4 = \square$$

$$\square + 7 = 9$$

②

$$4 + 2 = \square$$

T: $\square + \square = \square$

$$5 + 1 = \square$$

T: $\square + \square = \square$

$$8 + 1 = \square$$

T: $\square + \square = \square$

$$5 + 3 = \square$$

T: $\square + \square = \square$

$$7 + 1 = \square$$

T: $\square + \square = \square$

$$4 + 5 = \square$$

T: $\square + \square = \square$

$$3 + 4 = \square$$

T: $\square + \square = \square$

$$4 + 3 = \square$$

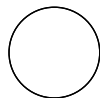
T: $\square + \square = \square$

$$5 + 5 = \square$$

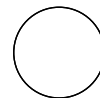
T: $\square + \square = \square$

③









④



8 €



9 €



10 ct

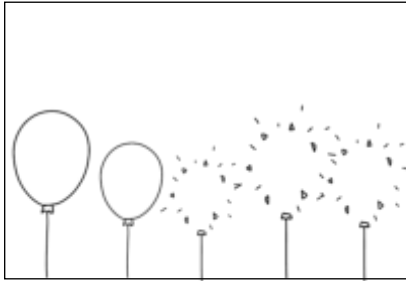


7 ct

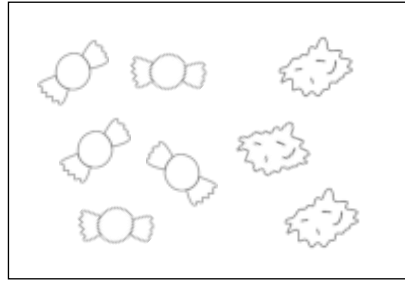


Minus

①



$$\square - \square = \square$$



$$\square - \square = \square$$



$$\square - \square = \square$$

②



$$\square - \square = \square$$



$$\square - \square = \square$$



$$\square - \square = \square$$



$$\square - \square = \square$$



$$\square - \square = \square$$



$$\square - \square = \square$$

③



$$7 - 3 = \square$$



$$9 - 2 = \square$$



$$6 - 1 = \square$$



$$8 - 5 = \square$$



$$10 - 4 = \square$$



$$8 - 3 = \square$$



$$6 - 3 = \square$$



$$4 - 2 = \square$$



$$5 - 4 = \square$$



$$7 - 2 = \square$$



$$8 - 6 = \square$$



$$9 - 5 = \square$$



$$3 - 1 = \square$$



$$4 - 3 = \square$$



$$10 - 5 = \square$$